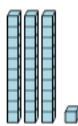
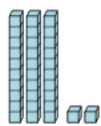


## Base 10 Blocks - Less or Greater Than - Pictures to Words - Tens and Ones


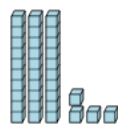
**1** Is the first set less than, greater than,  
or equal to the second set?



A less  
C greater

B equals

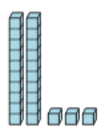
**2** Is the first set less than, greater than,  
or equal to the second set?



A less  
C greater

B equals

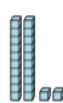
**3** Is the first set less than, greater than,  
or equal to the second set?



A less  
C greater

B equals

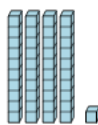
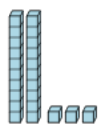
**4** Is the first set less than, greater than,  
or equal to the second set?



A less  
C greater

B equals

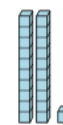
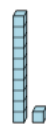
**5** Is the first set less than, greater than,  
or equal to the second set?



A less  
C greater

B equals

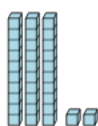
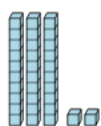
**6** Is the first set less than, greater than,  
or equal to the second set?



A less  
C greater

B equals

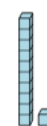
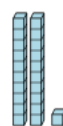
**7** Is the first set less than, greater than,  
or equal to the second set?



A less  
C greater

B equals

**8** Is the first set less than, greater than,  
or equal to the second set?



A less  
C greater

B equals