
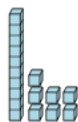




Base 10 Blocks - Less or Greater Than - Pictures to Words - Tens and Ones



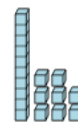
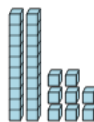
1 Is the first set less than, greater than,
or equal to the second set?



A less
C greater

B equals

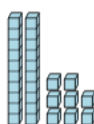
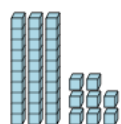
2 Is the first set less than, greater than,
or equal to the second set?



A less
C greater

B equals


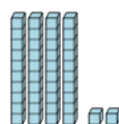
3 Is the first set less than, greater than,
or equal to the second set?



A less
C greater

B equals

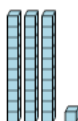
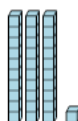
4 Is the first set less than, greater than,
or equal to the second set?



A less
C greater

B equals

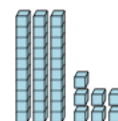
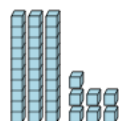
5 Is the first set less than, greater than,
or equal to the second set?



A less
C greater

B equals

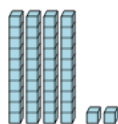
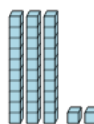
6 Is the first set less than, greater than,
or equal to the second set?



A less
C greater

B equals

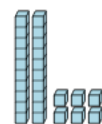
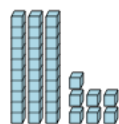
7 Is the first set less than, greater than,
or equal to the second set?



A less
C greater

B equals

8 Is the first set less than, greater than,
or equal to the second set?



A less
C greater

B equals