




## Base 10 Blocks - Less or Greater Than - Pictures to Words - Thousands and

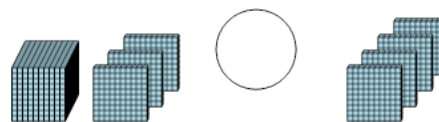
### Hundreds

**1** Is the first set less than, greater than, or equal to the second set?



A	less	B	equals
C	greater		

**2** Is the first set less than, greater than, or equal to the second set?



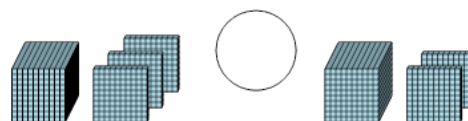
A	less	B	equals
C	greater		

**3** Is the first set less than, greater than, or equal to the second set?



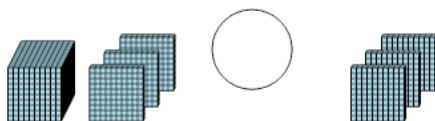
A	less	B	equals
C	greater		

**4** Is the first set less than, greater than, or equal to the second set?



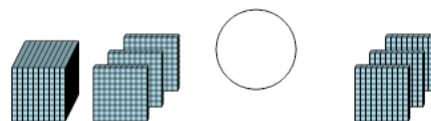
A	less	B	equals
C	greater		

**5** Is the first set less than, greater than, or equal to the second set?




A	less	B	equals
C	greater		

**6** Is the first set less than, greater than, or equal to the second set?



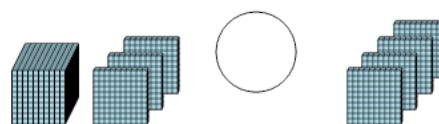
A	less	B	equals
C	greater		

**7** Is the first set less than, greater than, or equal to the second set?



A	less	B	equals
C	greater		

**8** Is the first set less than, greater than, or equal to the second set?



A	less	B	equals
C	greater		