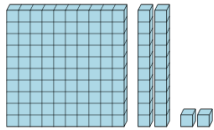




Base 10 Blocks - Counting - Picture to Places - Hundreds, Tens, and Ones



1 Count the different base ten blocks



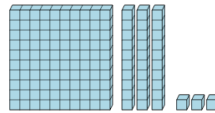
A 1 hundred, 2 tens, and 2 ones

B 1 hundred, 2 tens, and 6 ones

C 1 thousand, 2 hundreds, 4 tens, and 3 ones

D 1 thousand, 3 hundreds, 2 tens, and 1 one

2 Count the different base ten blocks



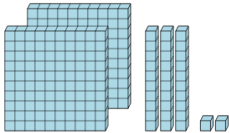
A 1 hundred, 3 tens, and 3 ones

B 2 tens, and 2 ones

C 3 thousands, 1 hundred, 4 tens, and 2 ones

D 2 thousands, 5 hundreds, 6 tens, and 7 ones

3 Count the different base ten blocks



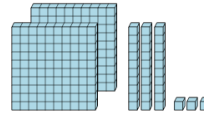
A 1 hundred, 1 ten, and 5 ones

B 5 hundreds, 6 tens, and 1 one

C 2 hundreds, 3 tens, and 2 ones

D 4 hundreds, 4 tens, and 1 one

4 Count the different base ten blocks



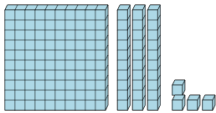
A 2 hundreds, 3 tens, and 3 ones

B 6 hundreds

C 6 tens, and 2 ones

D 2 hundreds, 2 tens, and 4 ones

5 Count the different base ten blocks



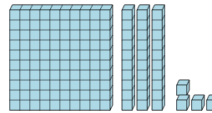
A 2 hundreds, 1 ten, and 5 ones

B 1 hundred, 3 tens, and 4 ones

C 8 ones

D 2 tens, and 3 ones

6 Count the different base ten blocks



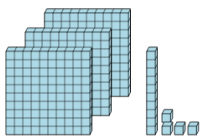
A 3 hundreds, 1 ten, and 8 ones

B 2 hundreds, 6 tens, and 8 ones

C 2 thousands, 3 hundreds, 3 tens, and 1 one

D 1 hundred, 3 tens, and 4 ones

7 Count the different base ten blocks



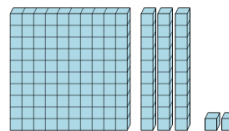
A 1 thousand, 5 hundreds, 1 ten, and 8 ones

B 2 hundreds, 3 tens, and 4 ones

C 3 thousands, 2 hundreds, and 7 ones

D 3 hundreds, 1 ten, and 4 ones

8 Count the different base ten blocks



A 3 hundreds, 1 ten, and 1 one

B 4 hundreds, 2 tens, and 2 ones

C 1 hundred, 3 tens, and 2 ones

D 2 hundreds, 6 tens, and 1 one