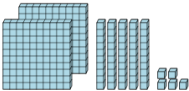
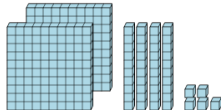
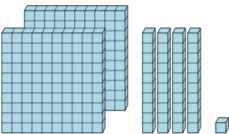
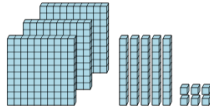

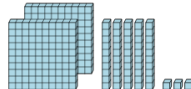
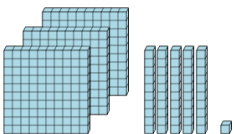
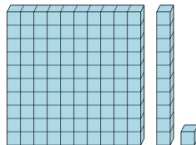




Base 10 Blocks - Counting - Picture to Places - Hundreds, Tens, and Ones



1 Count the different base ten blocks 	A 3 hundreds, 9 tens, and 9 ones B 2 hundreds, 9 tens, and 7 ones C 2 hundreds, 8 tens, and 7 ones D 2 hundreds, 5 tens, and 5 ones	2 Count the different base ten blocks 	A 4 hundreds, 4 tens, and 3 ones B 5 hundreds, 2 tens, and 1 one C 2 hundreds, and 2 tens D 2 hundreds, 4 tens, and 5 ones
3 Count the different base ten blocks 	A 6 hundreds, 4 tens, and 2 ones B 4 hundreds, 7 tens, and 1 one C 2 hundreds, 4 tens, and 1 one D 2 hundreds, 8 tens, and 2 ones	4 Count the different base ten blocks 	A 1 hundred, 2 tens, and 8 ones B 3 hundreds, 5 tens, and 6 ones C 4 hundreds, 2 tens, and 2 ones D 3 hundreds, 4 tens, and 2 ones
5 Count the different base ten blocks 	A 2 thousands, and 1 one B 7 hundreds, and 3 ones C 2 hundreds, 1 ten, and 3 ones D 3 hundreds, 2 tens, and 1 one	6 Count the different base ten blocks 	A 5 tens, and 1 one B 9 tens, and 2 ones C 2 hundreds, 5 tens, and 3 ones D 2 hundreds, and 7 ones
7 Count the different base ten blocks 	A 9 tens, and 1 one B 3 hundreds, 5 tens, and 1 one C 1 hundred, 2 tens, and 3 ones D 1 hundred, 5 tens, and 1 one	8 Count the different base ten blocks 	A 1 ten, and 1 one B 1 hundred, 1 ten, and 1 one C 1 hundred, 3 tens, and 3 ones D 5 hundreds, and 1 ten