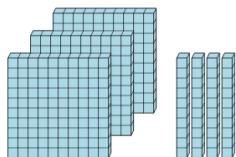




Base 10 Blocks - Counting - Picture to Places - Hundreds and Tens



1 Count the different base ten blocks

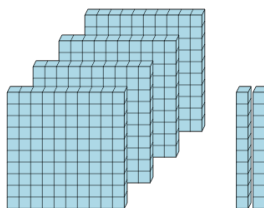


A 4 thousands, and 2 tens

B 3 hundreds, and 4 tens

C 3 hundreds, and 3 tens

2 Count the different base ten blocks



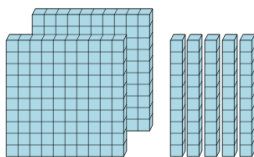
A 1 thousand, and 3 tens

B 5 thousands, and 2 tens

C 7 hundreds, and 1 ten

D 4 hundreds, and 2 tens

3 Count the different base ten blocks



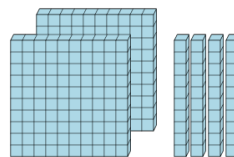
A 1 hundred, and 1 ten

B 2 hundreds, and 1 ten

C 2 hundreds, and 5 tens

D 3 hundreds, 5 tens, and 4 ones

4 Count the different base ten blocks

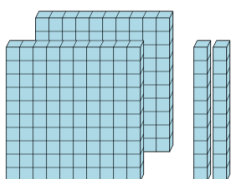


A 3 hundreds, and 1 ten

B 1 thousand, 3 hundreds, and 8 tens

C 2 hundreds, and 4 tens

5 Count the different base ten blocks



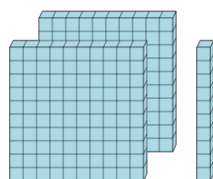
A 2 hundreds, and 2 tens

B 2 hundreds, and 3 tens

C 2 thousands, 1 hundred, and 3 tens

D 3 thousands, 3 hundreds, and 2 tens

6 Count the different base ten blocks



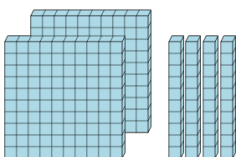
A 1 hundred, and 2 tens

B 4 hundreds, and 4 tens

C 2 hundreds, and 1 ten

D 6 hundreds, and 1 ten

7 Count the different base ten blocks



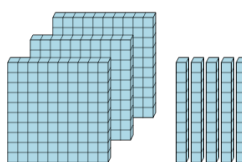
A 1 hundred, and 3 tens

B 1 hundred

C 2 hundreds, and 4 tens

D 3 hundreds, and 5 tens

8 Count the different base ten blocks



A 6 hundreds, and 9 tens

B 2 hundreds, and 3 tens

C 5 hundreds

D 3 hundreds, and 5 tens