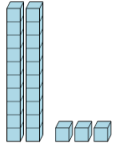




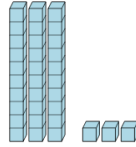
## Base 10 Blocks - Counting - Picture to Places - Tens and Ones

**1** Count the different base ten blocks



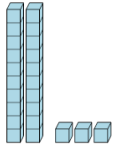
A 2 tens, and 3 ones  
B 2 thousands, and 3 tens  
C 2 thousands, 2 hundreds, 3 tens, and 2 ones  
D 1 ten, and 3 ones

**2** Count the different base ten blocks



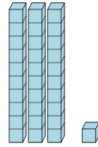
A 7 tens, and 1 one  
B 1 ten  
C 4 thousands, and 2 tens  
D 3 tens, and 3 ones

**3** Count the different base ten blocks



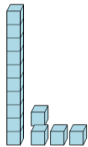
A 2 tens, and 3 ones  
B 1 hundred, 5 tens, and 7 ones  
C 5 tens, and 3 ones  
D 4 hundreds, 3 tens, and 2 ones

**4** Count the different base ten blocks



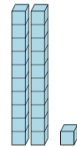
A 1 ten, and 4 ones  
B 3 tens, and 1 one  
C 5 tens, and 2 ones  
D 2 tens, and 4 ones

**5** Count the different base ten blocks



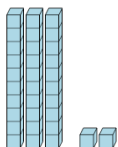
A 1 ten, and 4 ones  
B 3 thousands, 2 tens, and 1 one  
C 5 tens, and 3 ones

**6** Count the different base ten blocks



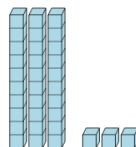
A 2 tens, and 4 ones  
B 2 tens, and 1 one  
C 2 tens, and 3 ones  
D 2 hundreds, and 3 tens

**7** Count the different base ten blocks



A 3 tens, and 2 ones  
B 6 tens, and 3 ones  
C 2 tens, and 2 ones  
D 4 tens, and 1 one

**8** Count the different base ten blocks



A 2 tens, and 5 ones  
B 3 tens, and 3 ones  
C 4 hundreds, 7 tens, and 7 ones  
D 7 tens, and 2 ones