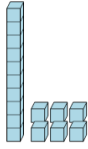




## Base 10 Blocks - Counting - Picture to Places - Tens and Ones

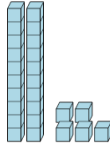


**1** Count the different base ten blocks



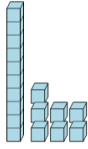
A 3 tens, and 7 ones  
B 1 ten, and 6 ones  
C 4 thousands, 2 tens, and 10 ones  
D 1 ten, and 3 ones

**2** Count the different base ten blocks



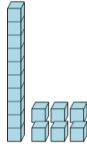
A 1 ten, and 1 one  
B 4 hundreds, and 5 tens  
C 2 thousands, 5 tens, and 3 ones  
D 2 tens, and 5 ones

**3** Count the different base ten blocks



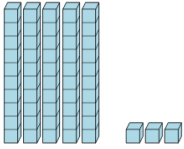
A 2 tens, and 9 ones  
B 3 tens, and 4 ones  
C 1 ten, and 7 ones  
D 4 tens, and 10 ones

**4** Count the different base ten blocks



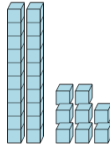
A 6 ones  
B 3 tens, and 7 ones  
C 1 ten, and 6 ones  
D 3 tens, and 6 ones

**5** Count the different base ten blocks



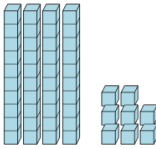
A 5 tens, and 1 one  
B 2 thousands, and 3 ones  
C 6 tens, and 2 ones  
D 5 tens, and 3 ones

**6** Count the different base ten blocks



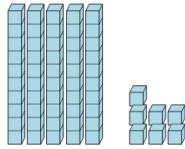
A 1 ten, and 12 ones  
B 5 hundreds, 3 tens, and 12 ones  
C 2 tens, and 8 ones

**7** Count the different base ten blocks



A 4 tens, and 5 ones  
B 1 ten, and 3 ones  
C 4 tens, and 12 ones  
D 4 tens, and 8 ones

**8** Count the different base ten blocks



A 1 ten, and 7 ones  
B 3 ones  
C 4 thousands, 4 hundreds, 1 ten, and 10 ones  
D 5 tens, and 7 ones