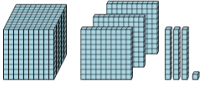


Base 10 Blocks - Counting - Picture to Places - Thousands, Hundreds, Tens, and

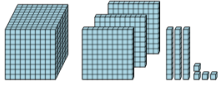
Ones

1 Count the different base ten blocks



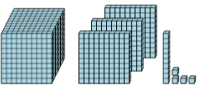
A 1 thousand, 3 hundreds, 3 tens, and 1 one
B 4 thousands, 5 hundreds, 6 tens, and 2 ones
C 1 thousand, 3 hundreds, 5 tens, and 3 ones
D 3 hundreds, 1 ten, and 2 ones

2 Count the different base ten blocks



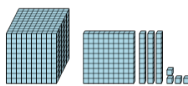
A 3 thousands, 4 hundreds, 1 ten, and 1 one
B 4 thousands, 5 hundreds, and 1 ten
C 1 thousand, 3 hundreds, 3 tens, and 4 ones
D 1 thousand, 1 hundred, 1 ten, and 1 one

3 Count the different base ten blocks



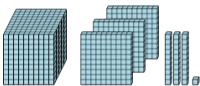
A 1 thousand, 3 hundreds, 1 ten, and 4 ones
B 5 thousands, 7 hundreds, 3 tens, and 7 ones
C 3 thousands, 6 hundreds, 2 tens, and 4 ones
D 2 thousands, 4 hundreds, and 3 tens

4 Count the different base ten blocks



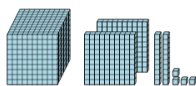
A 4 thousands, 3 hundreds, 1 ten, and 4 ones
B 1 thousand, 3 hundreds, 5 tens, and 7 ones
C 1 thousand, 5 hundreds, 4 tens, and 5 ones
D 1 thousand, 1 hundred, 3 tens, and 4 ones

5 Count the different base ten blocks



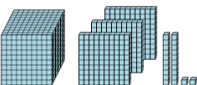
A 4 thousands, 5 hundreds, 3 tens, and 4 ones
B 4 thousands, 1 ten, and 1 one
C 1 thousand, 3 hundreds, 3 tens, and 1 one
D 2 thousands, 5 hundreds, 6 tens, and 4 ones

6 Count the different base ten blocks



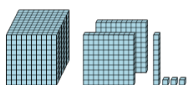
A 5 thousands, 3 hundreds, 3 tens, and 6 ones
B 5 thousands, 1 hundred, 3 tens, and 2 ones
C 1 thousand, 2 hundreds, 2 tens, and 4 ones
D 2 thousands, 3 hundreds, and 2 tens

7 Count the different base ten blocks



A 4 thousands, 4 hundreds, 3 tens, and 3 ones
B 1 thousand, 3 hundreds, 2 tens, and 2 ones
C 3 thousands, 4 hundreds, 3 tens, and 6 ones
D 3 thousands, 1 hundred, 3 tens, and 2 ones

8 Count the different base ten blocks



A 5 hundreds, 2 tens, and 7 ones
B 3 thousands, 4 hundreds, 2 tens, and 2 ones
C 1 ten, and 2 ones
D 1 thousand, 2 hundreds, 1 ten, and 3 ones