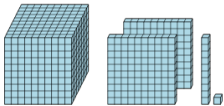

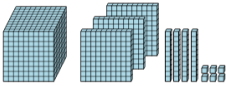
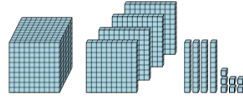
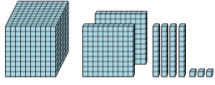
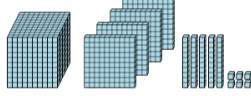
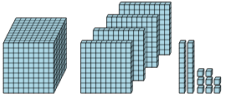
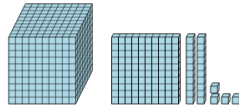


Base 10 Blocks - Counting - Picture to Places - Thousands, Hundreds, Tens, and

Ones

1 Count the different base ten blocks 	A 2 thousands, 3 hundreds, and 2 ones B 1 hundred, 4 tens, and 5 ones C 1 thousand, 2 hundreds, 1 ten, and 1 one D 5 thousands, 1 hundred, and 1 one	2 Count the different base ten blocks 	A 3 thousands, 6 tens, and 6 ones B 1 hundred, 6 tens, and 12 ones C 1 thousand, 4 hundreds, 5 tens, and 8 ones D 5 thousands, 5 hundreds, 3 tens, and 7 ones
3 Count the different base ten blocks 	A 3 thousands, 3 hundreds, 3 tens, and 3 ones B 1 thousand, 3 hundreds, 4 tens, and 6 ones C 1 thousand, 7 hundreds, 6 tens, and 9 ones D 3 thousands, 4 hundreds, 8 tens, and 6 ones	4 Count the different base ten blocks 	A 4 thousands, 4 hundreds, 8 tens, and 8 ones B 1 thousand, 4 hundreds, 4 tens, and 7 ones C 2 thousands, 1 hundred, 1 ten, and 8 ones D 5 thousands, 3 tens, and 8 ones
5 Count the different base ten blocks 	A 4 thousands, 6 hundreds, 5 tens, and 7 ones B 1 thousand, 2 hundreds, 4 tens, and 3 ones C 1 thousand, 1 hundred, 8 tens, and 2 ones D 1 thousand, 2 hundreds, 8 tens, and 3 ones	6 Count the different base ten blocks 	A 1 thousand, 4 hundreds, 5 tens, and 6 ones B 3 thousands, 4 tens, and 5 ones C 1 thousand, 8 hundreds, 4 tens, and 5 ones D 4 thousands, 1 hundred, 9 tens, and 2 ones
7 Count the different base ten blocks 	A 1 thousand, 4 hundreds, 2 tens, and 8 ones B 3 thousands, 2 hundreds, 4 tens, and 4 ones C 2 thousands, 7 hundreds, 5 tens, and 12 ones D 5 thousands, 1 hundred, 4 tens, and 5 ones	8 Count the different base ten blocks 	A 1 thousand, 2 tens, and 7 ones B 4 thousands, 1 hundred, 2 tens, and 4 ones C 1 thousand, 1 hundred, 2 tens, and 4 ones D 3 thousands, 1 hundred, 5 tens, and 3 ones