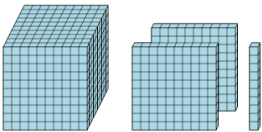
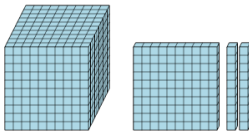
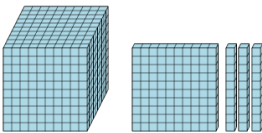
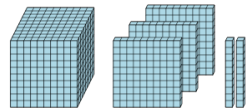
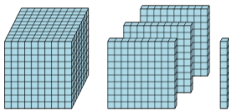
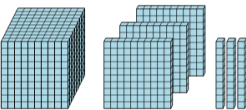
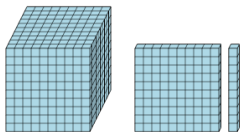
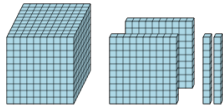




Base 10 Blocks - Counting - Picture to Places - Thousands, Hundreds and Tens



1 Count the different base ten blocks 	A 4 thousands, 3 hundreds, and 1 ten B 1 thousand, 2 hundreds, and 1 ten C 4 thousands, 2 hundreds, and 5 tens D 1 thousand, 5 hundreds, and 1 ten	2 Count the different base ten blocks 	A 1 thousand, 1 hundred, and 2 tens B 4 thousands, 4 hundreds, and 1 ten C 1 thousand, 1 hundred, and 3 tens D 1 hundred, and 2 tens
3 Count the different base ten blocks 	A 2 thousands, 4 hundreds, and 3 tens B 1 thousand, 1 hundred, and 3 tens C 4 thousands, 2 hundreds, and 1 ten D 4 thousands, and 3 tens	4 Count the different base ten blocks 	A 4 thousands, 2 hundreds, 1 ten, and 3 ones B 4 thousands, 5 hundreds, and 2 tens C 1 thousand, and 7 hundreds D 1 thousand, 3 hundreds, and 2 tens
5 Count the different base ten blocks 	A 1 thousand, 3 hundreds, and 1 ten B 1 thousand, 4 hundreds, and 2 tens C 4 thousands, and 4 tens D 4 thousands	6 Count the different base ten blocks 	A 4 thousands, 2 hundreds, and 7 tens B 3 thousands, 1 hundred, and 7 tens C 1 thousand, 6 hundreds, 5 tens, and 2 ones D 1 thousand, 3 hundreds, and 3 tens
7 Count the different base ten blocks 	A 4 thousands, 4 hundreds, and 5 tens B 1 thousand, 1 hundred, and 1 ten C 2 thousands, 1 hundred, and 4 tens D 3 thousands, 2 hundreds, 4 tens, and 4 ones	8 Count the different base ten blocks 	A 5 tens B 1 thousand, 3 hundreds, and 4 tens C 1 thousand, 2 hundreds, and 2 tens D 4 thousands, 6 hundreds, 1 ten, and 5 ones