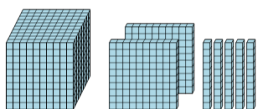




Base 10 Blocks - Counting - Picture to Places - Thousands, Hundreds and Tens

1 Count the different base ten blocks



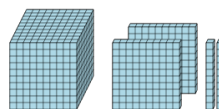
A 4 thousands, 1 hundred, and 4 ones

B 2 thousands, 5 hundreds, and 1 ten

C 1 thousand, 2 hundreds, and 5 tens

D 2 thousands, 1 hundred, and 2 tens

2 Count the different base ten blocks



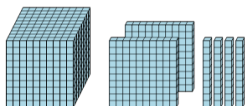
A 1 thousand, 1 hundred, and 3 tens

B 1 thousand, and 6 tens

C 3 thousands, 3 hundreds, and 2 tens

D 1 thousand, 2 hundreds, and 2 tens

3 Count the different base ten blocks



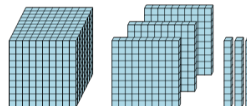
A 1 thousand, 2 hundreds, and 4 tens

B 4 thousands, 1 hundred, and 2 tens

C 5 thousands, 1 hundred, and 8 tens

D 4 thousands, 2 hundreds, and 3 tens

4 Count the different base ten blocks



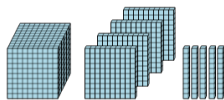
A 1 thousand, 1 hundred, and 7 tens

B 2 thousands, 1 hundred, and 4 tens

C 1 thousand, 3 hundreds, and 3 tens

D 1 thousand, 7 hundreds, and 7 tens

5 Count the different base ten blocks



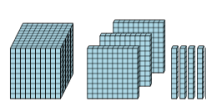
A 5 thousands, and 5 tens

B 1 thousand, 4 hundreds, and 5 tens

C 3 thousands, 2 hundreds, and 5 tens

D 4 thousands, 3 hundreds, 4 tens, and 4 ones

6 Count the different base ten blocks



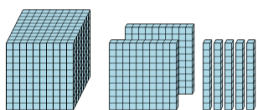
A 5 thousands, 2 hundreds, and 2 tens

B 5 hundreds, and 5 tens

C 2 thousands, 7 hundreds, and 4 tens

D 1 thousand, 3 hundreds, and 5 tens

7 Count the different base ten blocks



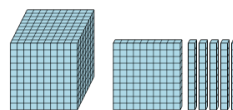
A 5 thousands, 6 hundreds, and 3 tens

B 1 thousand, 2 hundreds, and 1 ten

C 4 thousands, and 8 tens

D 1 thousand, 2 hundreds, and 5 tens

8 Count the different base ten blocks



A 1 thousand, 2 hundreds, and 4 tens

B 2 thousands, and 2 hundreds

C 1 thousand, 1 hundred, and 5 tens

D 4 thousands, 3 hundreds, and 3 tens