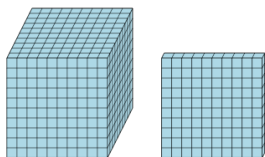




Base 10 Blocks - Counting - Picture to Places - Thousands and Hundreds

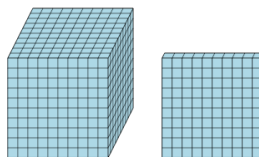


1 Count the different base ten blocks



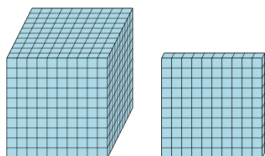
- A 4 thousands, and 4 hundreds
- B 1 thousand, and 1 hundred
- C 1 hundred
- D 3 thousands, and 3 hundreds

2 Count the different base ten blocks



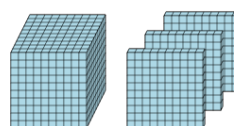
- A 1 thousand, and 1 hundred
- B 2 thousands, and 3 hundreds
- C 3 thousands, and 5 hundreds
- D 1 hundred

3 Count the different base ten blocks



- A 5 thousands, and 1 hundred
- B 2 thousands, and 1 hundred
- C 1 thousand, and 1 hundred
- D 4 thousands, and 2 hundreds

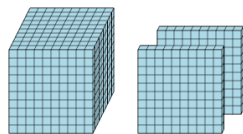
4



Count the different base ten blocks

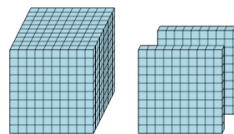
- A 1 thousand, and 3 hundreds
- B 3 thousands, and 2 hundreds

5 Count the different base ten blocks



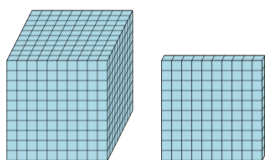
- A 4 hundreds
- B 1 thousand, and 2 hundreds
- C 2 thousands, and 1 hundred
- D 3 thousands, and 1 hundred

6 Count the different base ten blocks



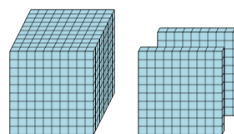
- A 5 thousands
- B 2 hundreds, and 5 tens
- C 1 thousand, and 2 hundreds
- D 4 thousands, and 4 hundreds

7 Count the different base ten blocks



- A 5 thousands, and 1 hundred
- B 1 thousand, and 1 hundred
- C 1 hundred, and 2 ones
- D 5 thousands, and 3 hundreds

8 Count the different base ten blocks



- A 3 thousands, and 3 hundreds
- B 1 thousand, and 2 hundreds
- C 3 thousands, 2 hundreds, and 2 ones