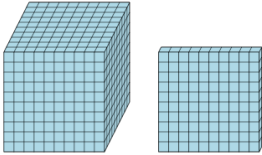




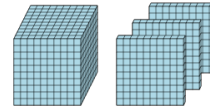
Base 10 Blocks - Counting - Picture to Places - Thousands and Hundreds

1 Count the different base ten blocks



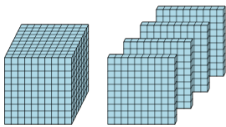
- A 1 thousand, and 1 hundred
- B 5 thousands, and 3 hundreds
- C 1 thousand, and 2 hundreds
- D 2 thousands, and 2 hundreds

2 Count the different base ten blocks



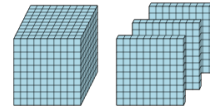
- A 3 thousands, 2 hundreds, and 3 tens
- B 3 thousands, and 1 hundred
- C 5 thousands, 1 hundred, 3 tens, and 3 ones
- D 1 thousand, and 3 hundreds

3 Count the different base ten blocks



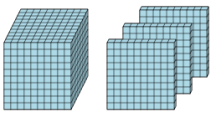
- A 7 hundreds
- B 1 thousand, and 4 hundreds
- C 4 thousands, and 1 hundred
- D 5 thousands, 5 hundreds, and 3 tens

4 Count the different base ten blocks



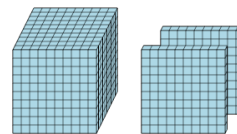
- A 3 thousands, 3 hundreds, and 2 tens
- B 1 thousand, 6 hundreds, and 4 ones
- C 1 thousand, and 3 hundreds
- D 4 thousands, and 7 hundreds

5 Count the different base ten blocks



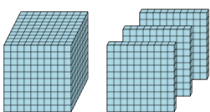
- A 3 thousands, 2 hundreds, and 5 ones
- B 4 thousands, 1 hundred, and 2 ones
- C 5 thousands, and 6 hundreds
- D 1 thousand, and 3 hundreds

6 Count the different base ten blocks



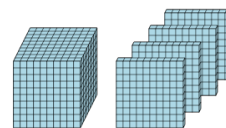
- A 1 thousand, and 5 hundreds
- B 1 thousand, and 2 hundreds
- C 1 thousand, and 1 hundred
- D 1 thousand

7 Count the different base ten blocks



- A 1 thousand, and 3 hundreds
- B 1 thousand, and 4 ones
- C 4 thousands, and 3 tens
- D 3 thousands, 4 hundreds, and 2 tens

8 Count the different base ten blocks



- A 1 thousand, and 4 hundreds
- B 1 ten, and 3 ones
- C 1 thousand, 7 hundreds, and 3 tens
- D 3 thousands, 2 hundreds, and 2 ones