
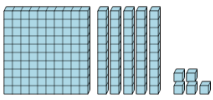
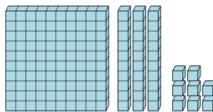
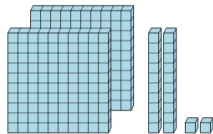
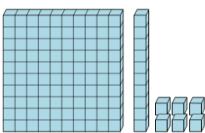
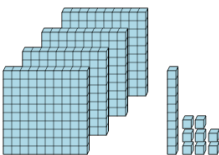
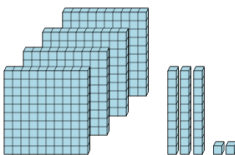
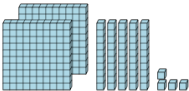
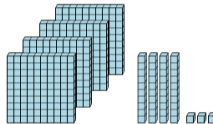




Base 10 Blocks - Counting - Picture to Word, Hundreds, Tens and Ones



1 Find the total number of blocks 	A three hundred and twenty-nine B one hundred and forty-four C one hundred and fifty-five D four hundred and fifty-seven	2 Find the total number of blocks 	A sixty-four B one hundred and thirty-eight C two thousand one hundred and seventy-two D two hundred and four
3 Find the total number of blocks 	A two hundred and twenty-two B twenty C two hundred and fifty-two D four hundred and twenty-two	4 Find the total number of blocks 	A four hundred and thirty-eight B one hundred and sixteen C four thousand three hundred and twelve D one thousand one hundred and fifty-eight
5 Find the total number of blocks 	A three hundred and twenty B one hundred and thirty-nine C four hundred and eighteen D two hundred and forty-six	6 Find the total number of blocks 	A three hundred and thirteen B four hundred and fifty C four hundred and thirty-two D seven hundred and eleven
7 Find the total number of blocks 	A two hundred and fifty-four B one hundred and twenty-one C four hundred and ninety-eight D seven	8 Find the total number of blocks 	A one hundred and sixty-six B four hundred and forty-three C five hundred and sixty-six D one hundred and thirty-two