

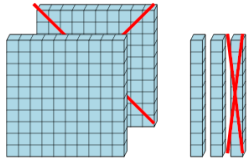


## Base 10 Blocks - Subtracting - Picture (Cross-out) to Answer, No Borrow -

### Hundreds and Tens

1

How many blocks are left?



730

216

60

D

E

F

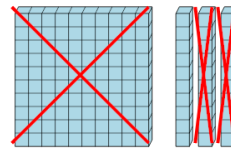
110

8

120

2

How many blocks are left?



A

B

C

323

186

157

D

E

F

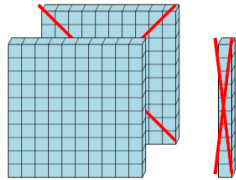
1260

10

4090

3

How many blocks are left?



A

B

C

100

300

43

D

E

F

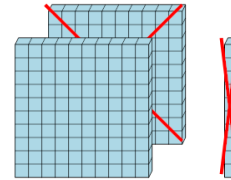
227

210

200

4

How many blocks are left?



A

B

C

380

140

579

D

E

F

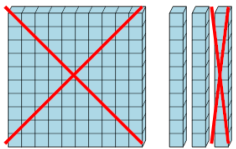
290

189

100

5

How many blocks are left?



A

B

C

313

160

220

D

E

F

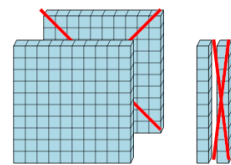
20

149

110

6

How many blocks are left?



A

B

C

190

1210

110

D

E

F

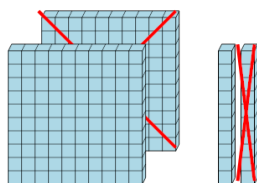
120

86

180

7

How many blocks are left?



A

B

C

287

380

630

D

E

F

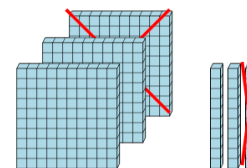
261

110

520

8

How many blocks are left?



A

B

C

190

220

170

D

E

F

90

3670

396