



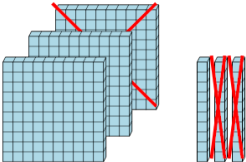
Base 10 Blocks - Subtracting - Picture (Cross-out) to Answer, No Borrow -

Hundreds and Tens

1 How many blocks are left?

A 210 B 491 C 260

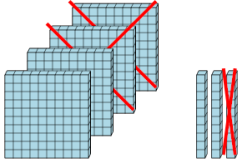
D 390 E 189 F 470



2 How many blocks are left?

A 1917 B 3210 C 517

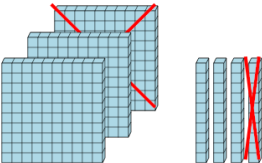
D 20 E 220 F 360



3 How many blocks are left?

A 240 B 770 C 230

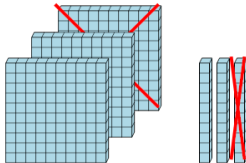
D 500 E 300 F 110



4 How many blocks are left?

A 317 B 220 C 130

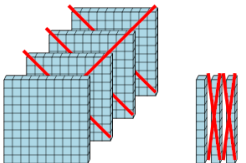
D 721 E 350 F 2000



5 How many blocks are left?

A 10 B 3569 C 98

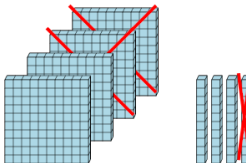
D 2288 E 110 F 1108



6 How many blocks are left?

A 1617 B 530 C 230

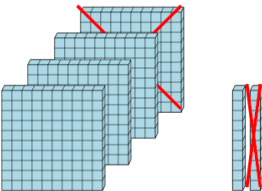
D 98 E 4070 F 2080



7 How many blocks are left?

A 190 B 310 C 110

D 510 E 1190 F 3200



8 How many blocks are left?

A 5090 B 150 C 110

D 49 E 329 F 210

