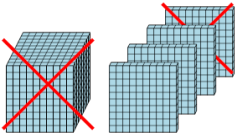
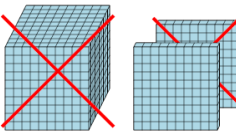

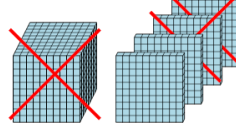

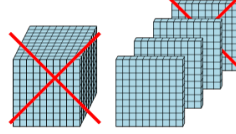
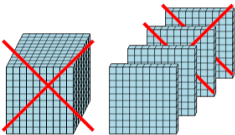
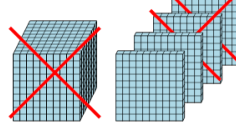




Base 10 Blocks - Subtracting - Picture (Cross-out) to Answer, No Borrow -

Thousands and Hundreds

1 How many blocks are left? 	A 3502	B 2520	C 1800	2 How many blocks are left? 	A 1198	B 659	C 965
D 160	E 400	F 300	D 1000	E 2700	F 100		
3 How many blocks are left? 	A 300	B 1090	C 1600	4 How many blocks are left? 	A 4400	B 2400	C 1203
D 97	E 1300	F 1803	D 900	E 200	F 799		
5 How many blocks are left? 	A 960	B 300	C 200	6 How many blocks are left? 	A 1015	B 2880	C 5600
D 4100	E 0	F 1400	D 3400	E 300	F 100		
7 How many blocks are left? 	A 40	B 940	C 850	8 How many blocks are left? 	A 2100	B 284	C 1600
D 200	E 760	F 1566	D 500	E 3600	F 200		