
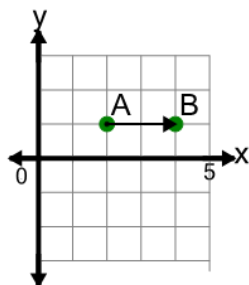


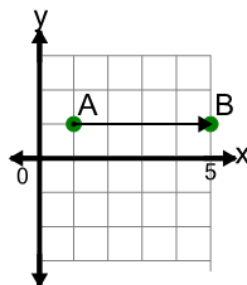


## Cartesian Grid - Direction Between Points (Straight)

**1**

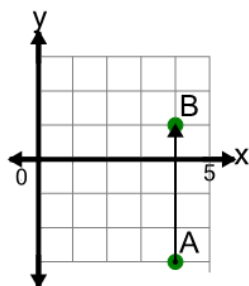
Find the direction to go from point A to point B on the diagram

A	Down 2
B	Right 2
C	Right 3
D	Right 1
E	Right 2, Up 1
F	Up 2

**2**

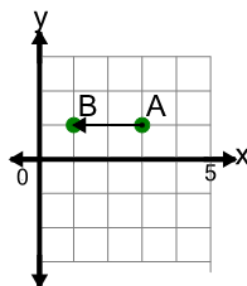
Find the direction to go from point A to point B on the diagram

A	Right 3
B	Right 5
C	Right 4
D	Right 4, Up 1
E	Up 4
F	Left 4

**3**

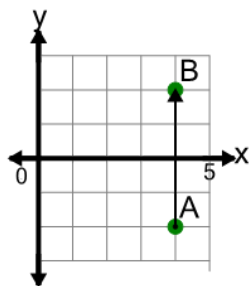
Find the direction to go from point A to point B on the diagram

A	Down 4
B	Right 1, Up 4
C	Up 4
D	Left 1, Up 4
E	Left 4
F	Right 4

**4**

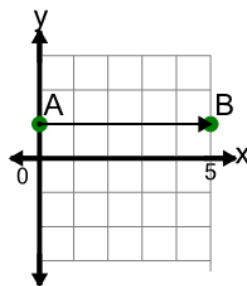
Find the direction to go from point A to point B on the diagram

A	Right 2
B	Up 2
C	Left 2, Down 1
D	Left 1
E	Down 2
F	Left 2

**5**

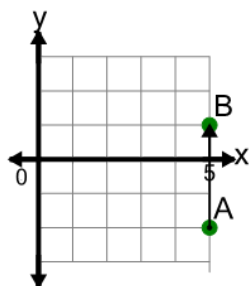
Find the direction to go from point A to point B on the diagram

A	Left 1, Up 4
B	Up 4
C	Right 4
D	Right 1, Up 4
E	Up 5
F	Up 3

**6**

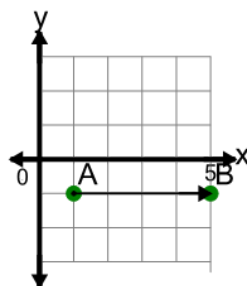
Find the direction to go from point A to point B on the diagram

A	Left 5
B	Up 5
C	Right 5, Up 1
D	Right 5, Down 1
E	Right 6
F	Right 5

**7**

Find the direction to go from point A to point B on the diagram

A	Down 3
B	Up 4
C	Right 3
D	Up 3
E	Right 1, Up 3
F	Up 2

**8**

Find the direction to go from point A to point B on the diagram

A	Left 4
B	Up 4
C	Right 4, Up 1
D	Right 5
E	Right 4
F	Right 4, Down 1