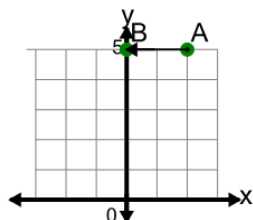


## Cartesian Grid - Direction Between Points (Straight)

1

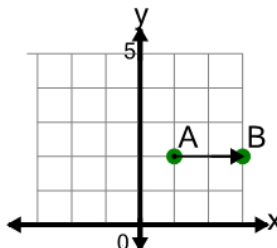
Find the direction to go from point A to point B on the diagram



A	Right 2	B	Left 3
C	Up 2	D	Left 1
E	Down 2	F	Left 2

2

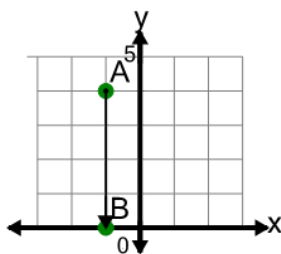
Find the direction to go from point A to point B on the diagram



A	Right 1
B	Right 2
C	Down 2
D	Left 2
E	Up 2
F	Right 2, Down 1

3

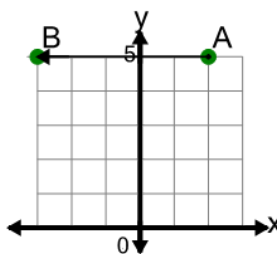
Find the direction to go from point A to point B on the diagram



A	Down 4
B	Up 4
C	Right 1, Down 4
D	Down 5
E	Left 4
F	Right 4

4

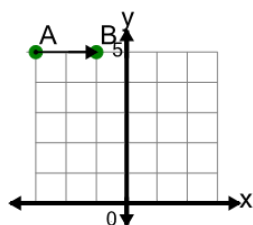
Find the direction to go from point A to point B on the diagram



A	Up 5
B	Left 5, Down 1
C	Right 5
D	Down 5
E	Left 5
F	Left 4

5

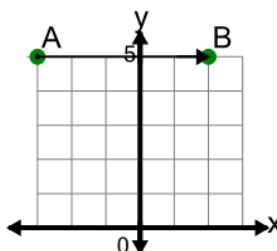
Find the direction to go from point A to point B on the diagram



A	Left 2	B	Right 3
C	Right 1	D	Right 2
E	Down 2	F	Up 2

6

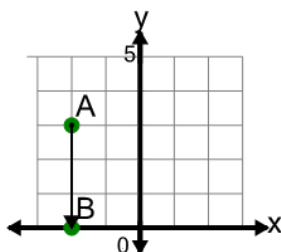
Find the direction to go from point A to point B on the diagram



A	Right 5, Up 1
B	Down 5
C	Right 6
D	Right 4
E	Up 5
F	Right 5

7

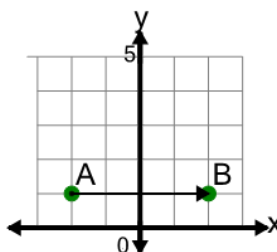
Find the direction to go from point A to point B on the diagram



A	Right 3
B	Left 1, Down 3
C	Left 3
D	Down 3
E	Up 3
F	Down 4

8

Find the direction to go from point A to point B on the diagram



A	Down 4
B	Up 4
C	Right 4
D	Left 4
E	Right 4, Down 1
F	Right 3