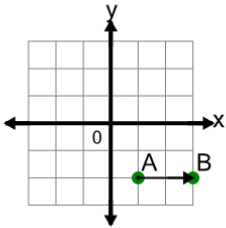
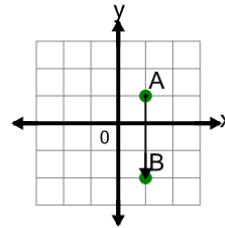


Cartesian Grid - Distance Between Points (Straight)

1

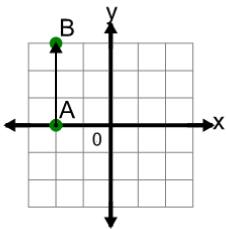
Find the distance between point A and point B on the diagram

A	2	B	0
C	5	D	3
E	4	F	1

2

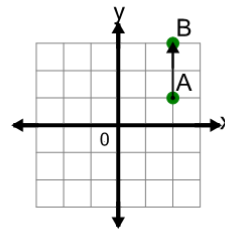
Find the distance between point A and point B on the diagram

A	6	B	1
C	0	D	2
E	3	F	4

3

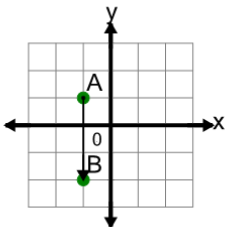
Find the distance between point A and point B on the diagram

A	3	B	5
C	4	D	2
E	6	F	1

4

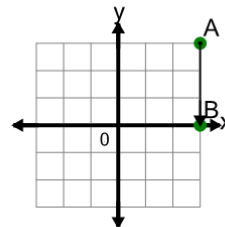
Find the distance between point A and point B on the diagram

A	5	B	1
C	4	D	2

5

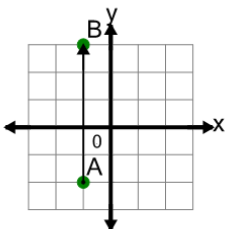
Find the distance between point A and point B on the diagram

A	1	B	4
C	5	D	6
E	3		

6

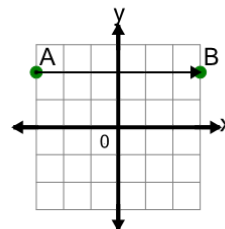
Find the distance between point A and point B on the diagram

A	3	B	6
C	0	D	2
E	1	F	4

7

Find the distance between point A and point B on the diagram

A	5	B	8
C	6	D	0
E	3	F	2

8

Find the distance between point A and point B on the diagram

A	8	B	2
C	6	D	3
E	9	F	7