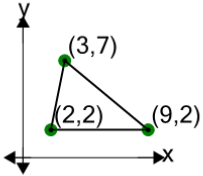


Cartesian Grid - Diagram Coordinates to Area (Acute Triangle) - Positive Only

1

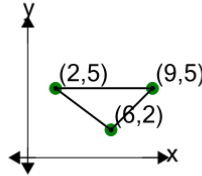
Find the area of the triangle formed by these coordinates



A	25	B	19
C	13	D	17.5
E	22	F	23.5

2

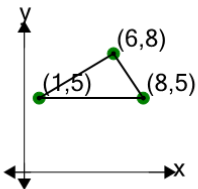
Find the area of the triangle formed by these coordinates



A	16.5	B	8.5
C	10.5	D	18.5
E	12.5	F	11.5

3

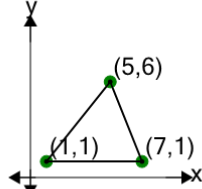
Find the area of the triangle formed by these coordinates



A	5.5	B	2.5
C	9.5	D	17.5
E	0.5	F	10.5

4

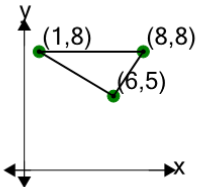
Find the area of the triangle formed by these coordinates



A	27	B	13.5
C	10.5	D	16.5
E	15	F	3

5

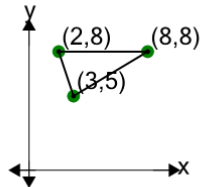
Find the area of the triangle formed by these coordinates



A	14.5	B	19.5
C	11.5	D	10.5
E	7.5	F	4.5

6

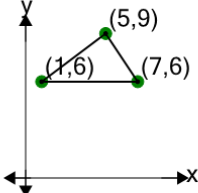
Find the area of the triangle formed by these coordinates



A	9	B	10
C	4	D	5
E	12.5	F	11.5

7

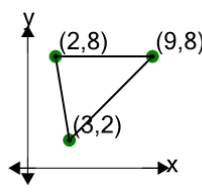
Find the area of the triangle formed by these coordinates



A	8.5	B	9
C	8	D	11
E	4.5	F	10.5

8

Find the area of the triangle formed by these coordinates



A	23	B	1
C	13	D	17
E	21	F	33