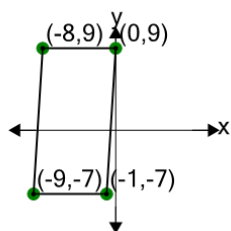


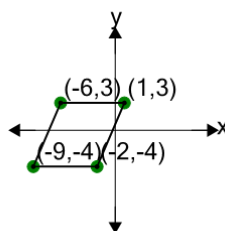


## Cartesian Grid - Diagram Coordinates to Area (Parallelogram) - Including Negative

**1**

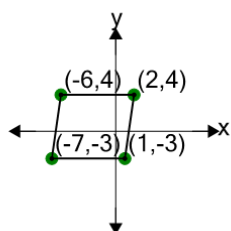
Find the area of the parallelogram formed by these coordinates

A	20	B	92
C	176	D	104
E	128	F	44

**2**

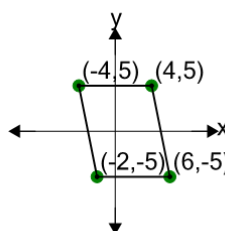
Find the area of the parallelogram formed by these coordinates

A	65	B	57
C	29	D	49
E	13	F	53

**3**

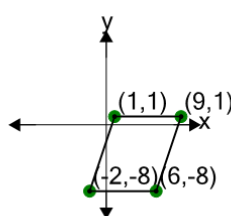
Find the area of the parallelogram formed by these coordinates

A	61	B	6
C	56	D	101
E	86	F	46

**4**

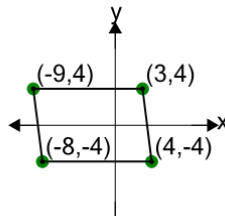
Find the area of the parallelogram formed by these coordinates

A	64	B	120
C	24	D	88
E	48	F	80

**5**

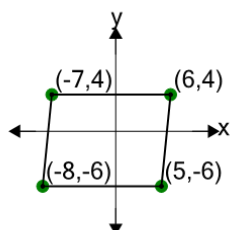
Find the area of the parallelogram formed by these coordinates

A	9	B	121
C	93	D	72
E	16	F	79

**6**

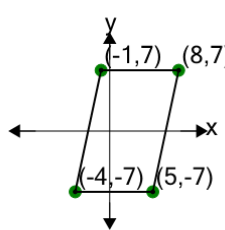
Find the area of the parallelogram formed by these coordinates

A	87	B	159
C	114	D	6
E	96	F	177

**7**

Find the area of the parallelogram formed by these coordinates

A	182	B	65
C	130	D	91
E	26	F	247

**8**

Find the area of the parallelogram formed by these coordinates

A	90	B	210
C	138	D	126
E	6	F	18