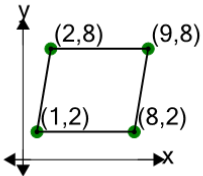


Cartesian Grid - Diagram Coordinates to Area (Parallelogram) - Positive Only

1

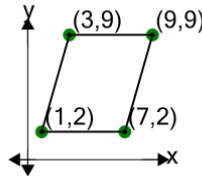
Find the area of the parallelogram formed by these coordinates



A	30	B	62
C	22	D	6
E	70	F	42

2

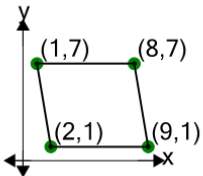
Find the area of the parallelogram formed by these coordinates



A	18	B	10
C	38	D	54
E	42	F	26

3

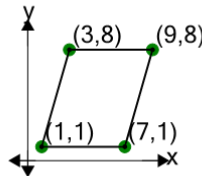
Find the area of the parallelogram formed by these coordinates



A	42	B	14
C	30	D	66
E	6	F	70

4

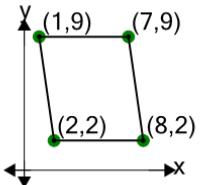
Find the area of the parallelogram formed by these coordinates



A	18	B	34
C	66	D	2
E	42	F	62

5

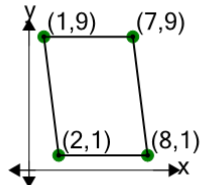
Find the area of the parallelogram formed by these coordinates



A	34	B	42
C	18	D	38
E	46	F	2

6

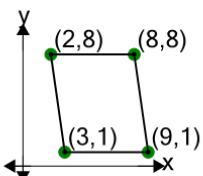
Find the area of the parallelogram formed by these coordinates



A	76	B	12
C	48	D	28
E	8	F	80

7

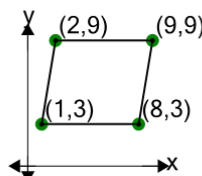
Find the area of the parallelogram formed by these coordinates



A	10	B	62
C	38	D	66
E	70	F	42

8

Find the area of the parallelogram formed by these coordinates



A	30	B	10
C	42	D	38
E	70	F	2