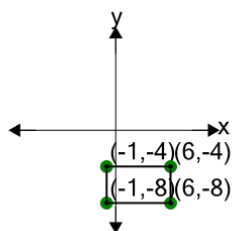


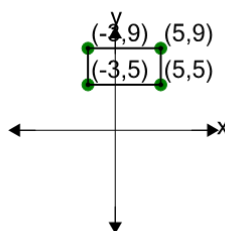


## Cartesian Grid - Diagram Coordinates to Area (Rectangle) - Including Negative

**1**

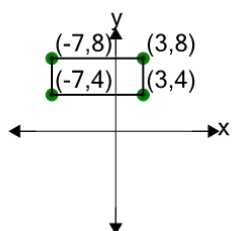
Find the area of the rectangle formed by these coordinates

A	28	B	20
C	36	D	46
E	42	F	16

**2**

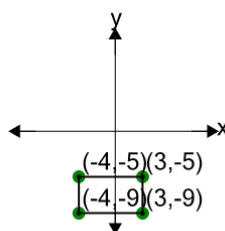
Find the area of the rectangle formed by these coordinates

A	11	B	29
C	32	D	41
E	5	F	47

**3**

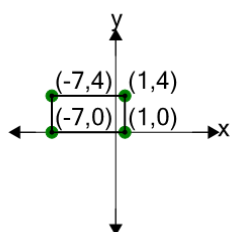
Find the area of the rectangle formed by these coordinates

A	16	B	48
C	40	D	12
E	72	F	44

**4**

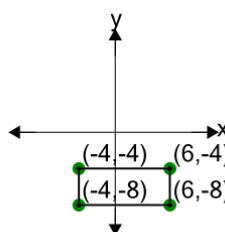
Find the area of the rectangle formed by these coordinates

A	18	B	32
C	24	D	28
E	10	F	36

**5**

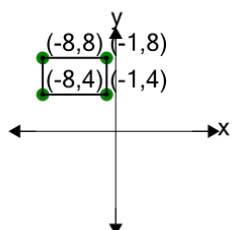
Find the area of the rectangle formed by these coordinates

A	38	B	32
C	20	D	35
E	17	F	44

**6**

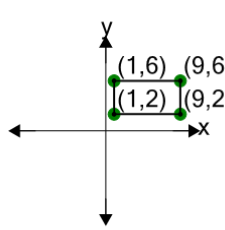
Find the area of the rectangle formed by these coordinates

A	36	B	64
C	72	D	44
E	8	F	40

**7**

Find the area of the rectangle formed by these coordinates

A	30	B	40
C	44	D	16
E	14	F	28

**8**

Find the area of the rectangle formed by these coordinates

A	23	B	2
C	32	D	8
E	59	F	44