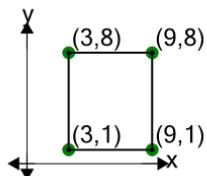


## Cartesian Grid - Diagram Coordinates to Area (Rectangle) - Positive Only

1

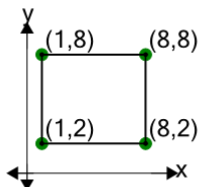
Find the area of the rectangle formed by these coordinates



A	62	B	10
C	66	D	38
E	54	F	42

2

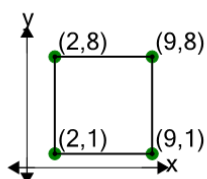
Find the area of the rectangle formed by these coordinates



A	50	B	42
C	74	D	66
E	6	F	34

3

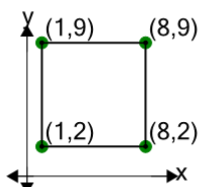
Find the area of the rectangle formed by these coordinates



A	29	B	13
C	49	D	73
E	37	F	53

4

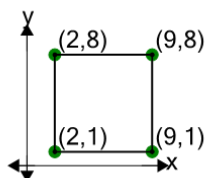
Find the area of the rectangle formed by these coordinates



A	41	B	65
C	29	D	61
E	49	F	85

5

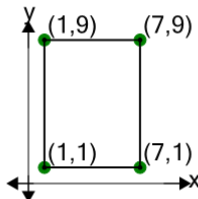
Find the area of the rectangle formed by these coordinates



A	65	B	69
C	53	D	85
E	17	F	49

6

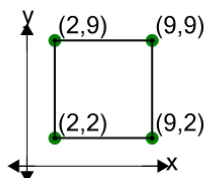
Find the area of the rectangle formed by these coordinates



A	56	B	84
C	12	D	40
E	24	F	48

7

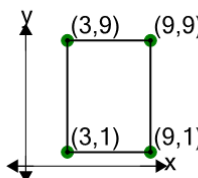
Find the area of the rectangle formed by these coordinates



A	49	B	69
C	85	D	61
E	81	F	73

8

Find the area of the rectangle formed by these coordinates



A	20	B	52
C	16	D	24
E	48	F	28