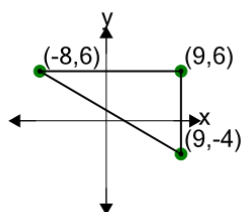




Cartesian Grid - Diagram Coordinates to Area (Right Triangle) - Including Negative



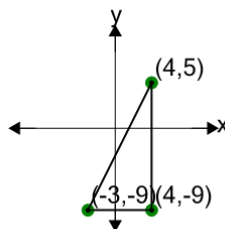
1



Find the area of the triangle formed by these coordinates

A	144.5	B	25.5
C	153	D	85
E	34	F	8.5

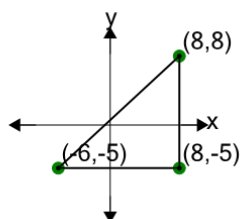
2



Find the area of the triangle formed by these coordinates

A	49	B	67
C	89.5	D	26.5
E	85	F	8.5

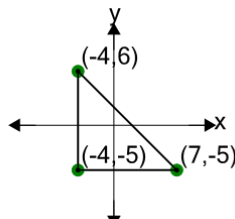
3



Find the area of the triangle formed by these coordinates

A	91	B	1
C	55	D	64
E	145	F	127

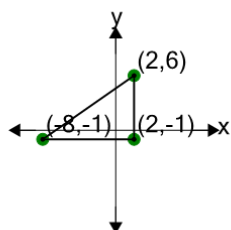
4



Find the area of the triangle formed by these coordinates

A	78.5	B	12.5
C	66.5	D	60.5
E	102.5	F	36.5

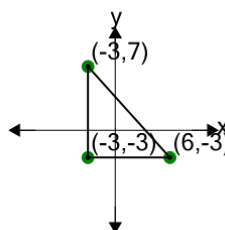
5



Find the area of the triangle formed by these coordinates

A	38.5	B	35
C	31.5	D	17.5
E	49	F	45.5

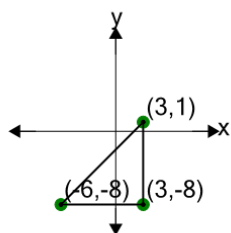
6



Find the area of the triangle formed by these coordinates

A	13.5	B	45
C	18	D	4.5
E	49.5	F	85.5

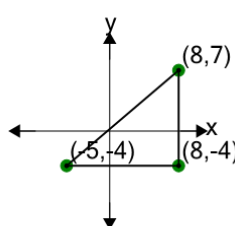
7



Find the area of the triangle formed by these coordinates

A	52.5	B	16.5
C	32.5	D	20.5
E	28.5	F	40.5

8



Find the area of the triangle formed by these coordinates

A	85.5	B	71.5
C	8.5	D	106.5
E	127.5	F	99.5