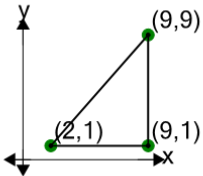




## Cartesian Grid - Diagram Coordinates to Area (Right Triangle) - Positive Only

**1**

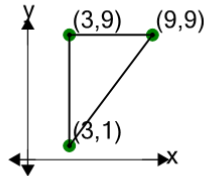
Find the area of the triangle formed by these coordinates



A	28	B	15.5
C	23	D	43
E	5.5	F	30.5

**2**

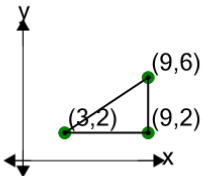
Find the area of the triangle formed by these coordinates



A	38	B	24
C	34	D	20
E	30	F	6

**3**

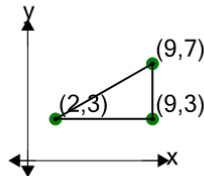
Find the area of the triangle formed by these coordinates



A	8	B	15
C	6	D	7
E	12	F	20

**4**

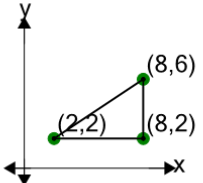
Find the area of the triangle formed by these coordinates



A	16	B	13
C	18	D	8
E	14	F	19

**5**

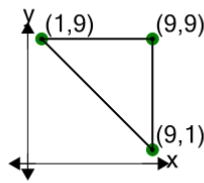
Find the area of the triangle formed by these coordinates



A	20	B	10
C	21	D	12
E	14	F	5

**6**

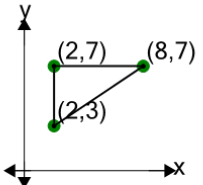
Find the area of the triangle formed by these coordinates



A	32	B	23
C	17	D	29
E	53	F	14

**7**

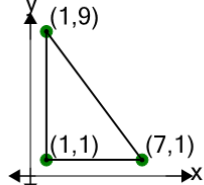
Find the area of the triangle formed by these coordinates



A	15	B	3
C	19	D	12
E	16	F	7

**8**

Find the area of the triangle formed by these coordinates



A	36	B	14
C	34	D	26
E	8	F	24