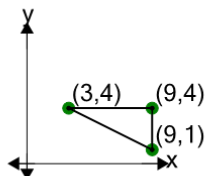




Cartesian Grid - Diagram Coordinates to Area (Right Triangle) - Positive Only

1

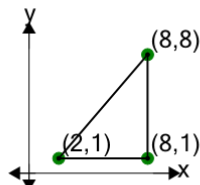
Find the area of the triangle formed by these coordinates



A	8.5	B	9
C	4	D	6.5
E	10.5	F	11

2

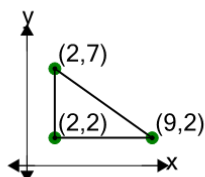
Find the area of the triangle formed by these coordinates



A	13	B	39
C	9	D	1
E	29	F	21

3

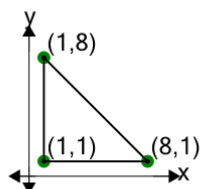
Find the area of the triangle formed by these coordinates



A	10	B	20.5
C	19	D	17.5
E	23.5	F	25

4

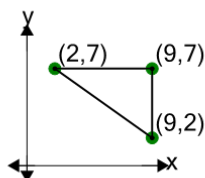
Find the area of the triangle formed by these coordinates



A	24.5	B	18.5
C	42.5	D	36.5
E	6.5	F	14.5

5

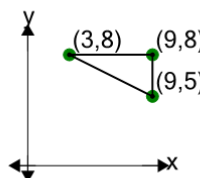
Find the area of the triangle formed by these coordinates



A	2.5	B	17.5
C	10	D	25
E	22	F	16

6

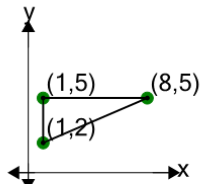
Find the area of the triangle formed by these coordinates



A	5.5	B	4.5
C	12	D	10.5
E	7.5	F	9

7

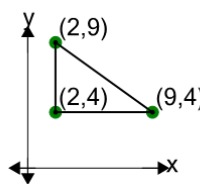
Find the area of the triangle formed by these coordinates



A	4.5	B	6.5
C	10.5	D	18.5
E	16.5	F	1.5

8

Find the area of the triangle formed by these coordinates



A	4	B	25
C	17.5	D	16
E	2.5	F	10