



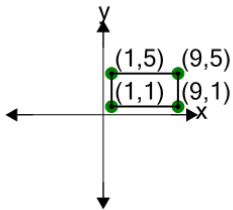
## Cartesian Grid - Diagram Coordinates to Perimeter (Rectangle) - Including



### Negative

1

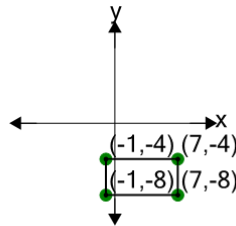
Find the perimeter of the rectangle formed by these coordinates



A	32	B	24
C	36	D	4
E	20	F	16

2

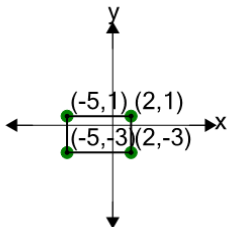
Find the perimeter of the rectangle formed by these coordinates



A	12	B	22
C	6	D	32
E	24	F	30

3

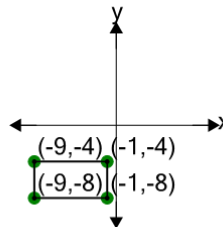
Find the perimeter of the rectangle formed by these coordinates



A	8	B	22
C	2	D	32
E	20	F	18

4

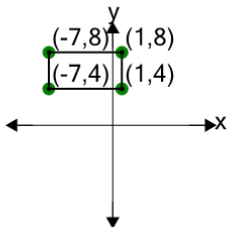
Find the perimeter of the rectangle formed by these coordinates



A	28	B	12
C	42	D	38
E	8	F	24

5

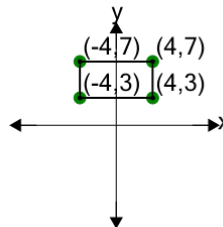
Find the perimeter of the rectangle formed by these coordinates



A	6	B	8
C	24	D	38
E	18	F	14

6

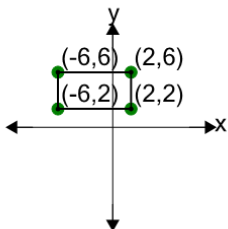
Find the perimeter of the rectangle formed by these coordinates



A	38	B	6
C	14	D	24
E	40	F	32

7

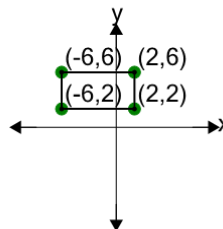
Find the perimeter of the rectangle formed by these coordinates



A	16	B	12
C	24	D	42
E	28	F	38

8

Find the perimeter of the rectangle formed by these coordinates



A	38	B	24
C	14	D	32
E	26	F	6