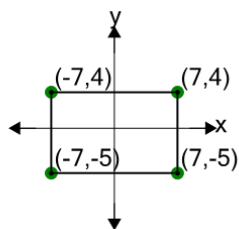
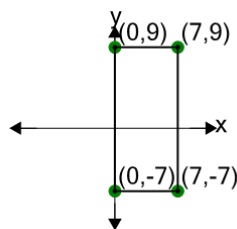


Cartesian Grid - Diagram Coordinates to Perimeter (Rectangle) - Including Negative

1

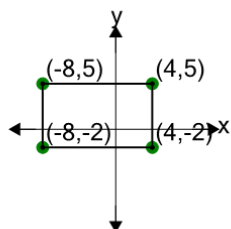
Find the perimeter of the rectangle formed by these coordinates

A	50	B	58
C	18	D	46
E	26	F	38

2

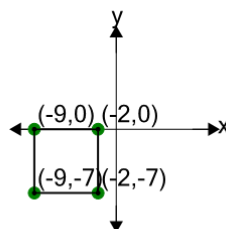
Find the perimeter of the rectangle formed by these coordinates

A	46	B	82
C	54	D	70
E	14	F	34

3

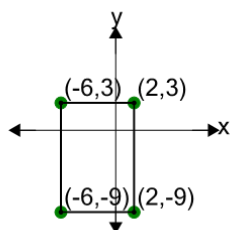
Find the perimeter of the rectangle formed by these coordinates

A	44	B	50
C	35	D	26
E	38	F	17

4

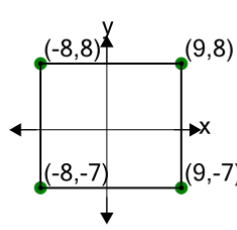
Find the perimeter of the rectangle formed by these coordinates

A	38	B	10
C	8	D	46
E	12	F	28

5

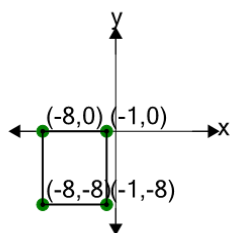
Find the perimeter of the rectangle formed by these coordinates

A	60	B	16
C	40	D	68
E	32	F	4

6

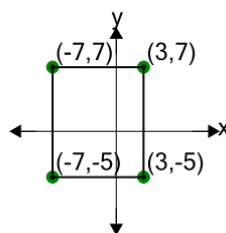
Find the perimeter of the rectangle formed by these coordinates

A	22	B	64
C	16	D	46
E	34	F	82

7

Find the perimeter of the rectangle formed by these coordinates

A	30	B	57
C	18	D	36
E	12	F	48

8

Find the perimeter of the rectangle formed by these coordinates

A	52	B	32
C	76	D	28
E	68	F	44