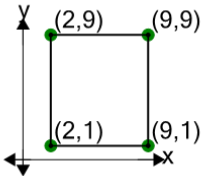




Cartesian Grid - Diagram Coordinates to Perimeter (Rectangle) - Positive Only

**1**

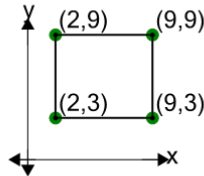
Find the perimeter of the rectangle formed by these coordinates



A	48	B	30
C	12	D	57
E	24	F	3

2

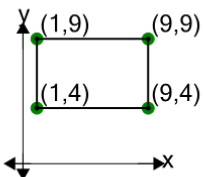
Find the perimeter of the rectangle formed by these coordinates



A	30	B	26
C	14	D	44
E	28	F	36

3

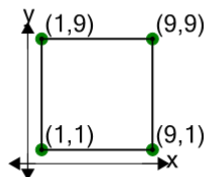
Find the perimeter of the rectangle formed by these coordinates



A	18	B	6
C	26	D	38
E	8	F	28

4

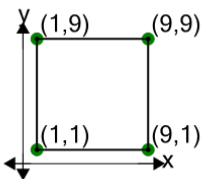
Find the perimeter of the rectangle formed by these coordinates



A	32	B	20
C	5	D	59
E	41	F	8

5

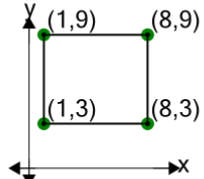
Find the perimeter of the rectangle formed by these coordinates



A	14	B	56
C	50	D	38
E	23	F	32

6

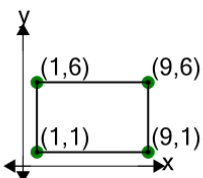
Find the perimeter of the rectangle formed by these coordinates



A	26	B	28
C	8	D	16
E	22	F	24

7

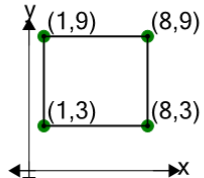
Find the perimeter of the rectangle formed by these coordinates



A	14	B	20
C	42	D	28
E	26	F	40

8

Find the perimeter of the rectangle formed by these coordinates



A	10	B	22
C	26	D	14
E	8	F	42