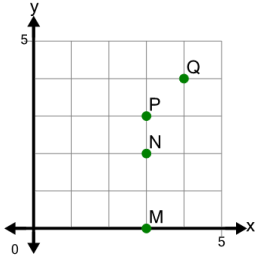
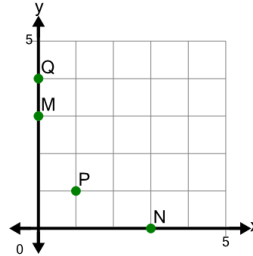
**1**

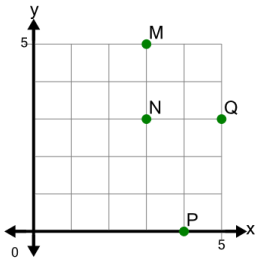
Identify which point is at (x,y)  
location (4,4)

A	P	B	M
C	N	D	Q

**2**

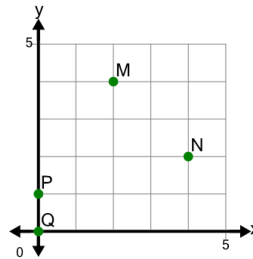
Identify which point is at (x,y)  
location (3,0)

A	N	B	P
C	Q	D	M

**3**

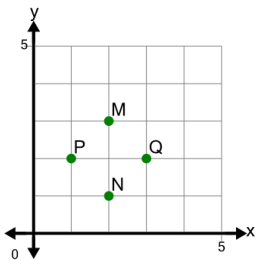
Identify which point is at (x,y)  
location (5,3)

A	N	B	Q
C	M	D	P

**4**

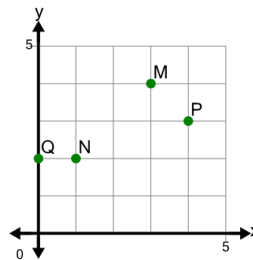
Identify which point is at (x,y)  
location (4,2)

A	Q	B	N
C	P	D	M

**5**

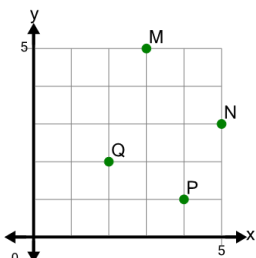
Identify which point is at (x,y)  
location (3,2)

A	P	B	M
C	Q	D	N

**6**

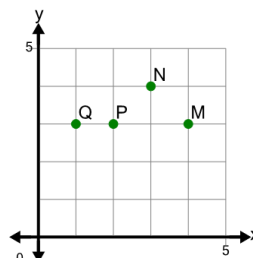
Identify which point is at (x,y)  
location (4,3)

A	M	B	Q
C	P	D	N

**7**

Identify which point is at (x,y)  
location (5,3)

A	Q	B	N
C	M	D	P

**8**

Identify which point is at (x,y)  
location (3,4)

A	P	B	Q
C	M	D	N