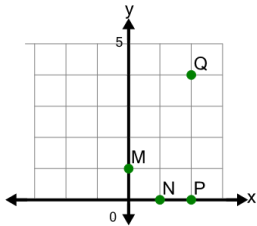


**1**

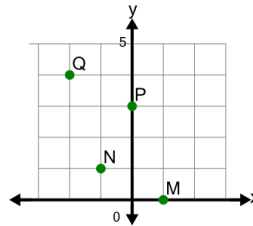
Identify which point is at (x,y)
location (1,0)



A	N	B	Q
C	P	D	M

2

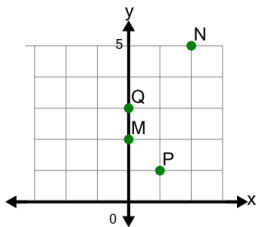
Identify which point is at (x,y)
location (-1,1)



A	N	B	Q
C	P	D	M

3

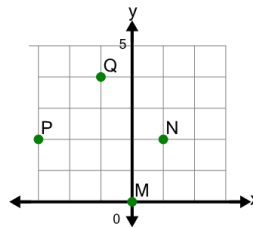
Identify which point is at (x,y)
location (2,5)



A	M	B	P
C	Q	D	N

4

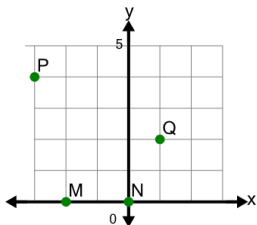
Identify which point is at (x,y)
location (-1,4)



A	M	B	P
C	N	D	Q

5

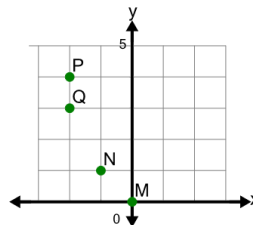
Identify which point is at (x,y)
location (-2,0)



A	Q	B	M
C	P	D	N

6

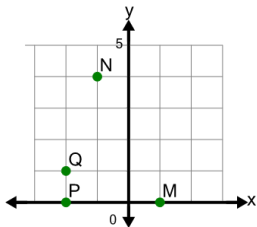
Identify which point is at (x,y)
location (-2,4)



A	N	B	P
C	Q	D	M

7

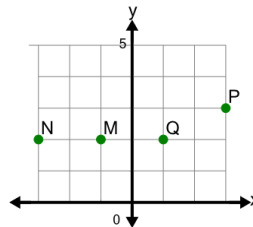
Identify which point is at (x,y)
location (-2,1)



A	P	B	Q
C	N	D	M

8

Identify which point is at (x,y)
location (3,3)



A	P	B	M
C	N	D	Q