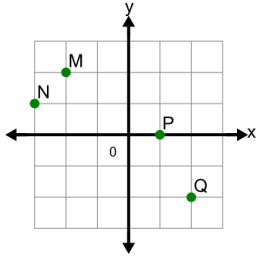
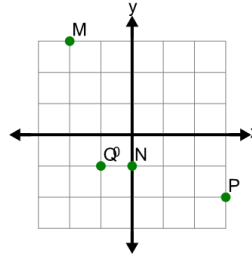
**1**

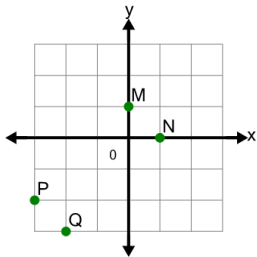
Identify which point is at (x,y)  
location (2,-2)

A	P	B	Q
C	N	D	M

**2**

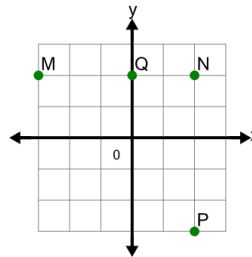
Identify which point is at (x,y)  
location (3,-2)

A	P	B	M
C	Q	D	N

**3**

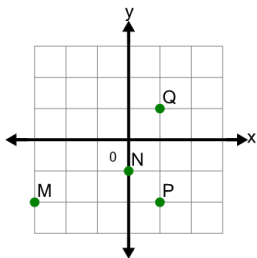
Identify which point is at (x,y)  
location (1,0)

A	Q	B	N
C	M	D	P

**4**

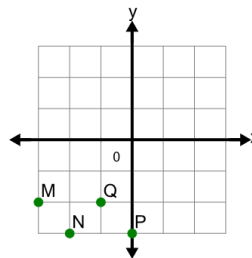
Identify which point is at (x,y)  
location (2,-3)

A	Q	B	M
C	N	D	P

**5**

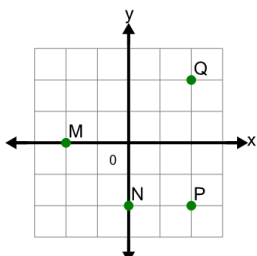
Identify which point is at (x,y)  
location (1,1)

A	Q	B	N
C	M	D	P

**6**

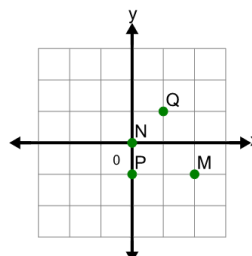
Identify which point is at (x,y)  
location (-3,-2)

A	N	B	M
C	P	D	Q

**7**

Identify which point is at (x,y)  
location (-2,0)

A	P	B	N
C	Q	D	M

**8**

Identify which point is at (x,y)  
location (0,0)

A	M	B	P
C	N	D	Q