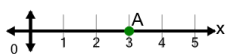




Cartesian Grid - X Coordinate number line (on axis, just number)

1

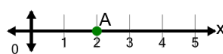
What is the value of 'x' for this point labelled 'A'?



| | | | |
|---|---|---|---|
| A | 1 | B | 2 |
| C | 6 | D | 4 |
| E | 0 | F | 3 |

2

What is the value of 'x' for this point labelled 'A'?



| | | | |
|---|---|---|----|
| A | 3 | B | 2 |
| C | 4 | D | 0 |
| E | 1 | F | -1 |

3

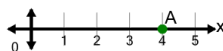
What is the value of 'x' for this point labelled 'A'?



| | | | |
|---|----|---|---|
| A | -2 | B | 2 |
| C | -1 | D | 0 |
| E | 1 | F | 4 |

4

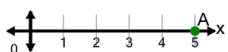
What is the value of 'x' for this point labelled 'A'?



| | | | |
|---|---|---|---|
| A | 7 | B | 2 |
| C | 5 | D | 4 |
| E | 6 | F | 3 |

5

What is the value of 'x' for this point labelled 'A'?



| | | | |
|---|---|---|---|
| A | 8 | B | 2 |
| C | 3 | D | 5 |
| E | 7 | F | 4 |