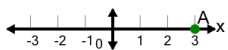




## Cartesian Grid - X Coordinate number line (on axis, just number)

**1**

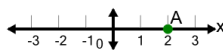
What is the value of 'x' for this point labelled 'A'?



A	5	B	2
C	6	D	1
E	3	F	0

**2**

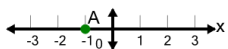
What is the value of 'x' for this point labelled 'A'?



A	4	B	-1
C	0	D	2
E	5	F	3

**3**

What is the value of 'x' for this point labelled 'A'?



A	-1	B	-4
C	-3	D	2
E	1	F	0

**4**

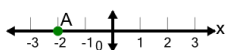
What is the value of 'x' for this point labelled 'A'?



A	-1	B	3
C	2	D	1
E	4		

**5**

What is the value of 'x' for this point labelled 'A'?



A	-3	B	1
C	0	D	-2
E	-5	F	-4