



Cartesian Grid - X Coordinate number line (on axis, just number)

1

What is the value of 'x' for this point labelled 'A'?



A	0	B	4
C	2	D	-1
E	3	F	1

2

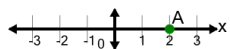
What is the value of 'x' for this point labelled 'A'?



A	2	B	-2
C	-1	D	1
E	-3	F	0

3

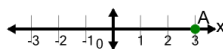
What is the value of 'x' for this point labelled 'A'?



A	1	B	2
C	-1	D	0
E	3	F	4

4

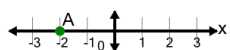
What is the value of 'x' for this point labelled 'A'?



A	2	B	0
C	6	D	4
E	1	F	3

5

What is the value of 'x' for this point labelled 'A'?



A	-3	B	0
C	1	D	-5
E	-4	F	-2