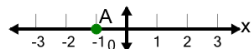




## Cartesian Grid - X Coordinate number line (on axis)

**1**

What is the value of 'x' for this point labelled 'A'?



A

$x = 0$

B

$x = -2$

C

$x = -1$

D

$x = -4$

E

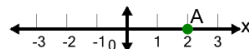
$x = 2$

F

$x = -3$

**2**

What is the value of 'x' for this point labelled 'A'?



A

$x = -1$

B

$x = 5$

C

$x = 0$

D

$x = 2$

E

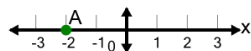
$x = 3$

F

$x = 4$

**3**

What is the value of 'x' for this point labelled 'A'?



A

$x = -3$

B

$x = -5$

C

$x = 1$

D

$x = -4$

E

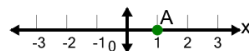
$x = -1$

F

$x = -2$

**4**

What is the value of 'x' for this point labelled 'A'?



A

$x = 0$

B

$x = -2$

C

$x = 4$

D

$x = 3$

E

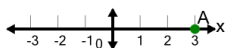
$x = -1$

F

$x = 1$

**5**

What is the value of 'x' for this point labelled 'A'?



A

$x = 5$

B

$x = 4$

C

$x = 3$

D

$x = 1$

E

$x = 2$

F

$x = 0$