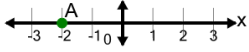




Cartesian Grid - X Coordinate number line (on axis)

**1**

What is the value of 'x' for this point labelled 'A'?



A

$x = -2$

B

$x = -4$

C

$x = -1$

D

$x = 0$

E

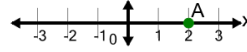
$x = -5$

F

$x = 1$

2

What is the value of 'x' for this point labelled 'A'?



A

$x = 0$

B

$x = 3$

C

$x = -1$

D

$x = 4$

E

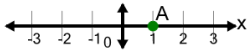
$x = 5$

F

$x = 2$

3

What is the value of 'x' for this point labelled 'A'?



A

$x = 0$

B

$x = 1$

C

$x = 4$

D

$x = -1$

E

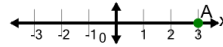
$x = 3$

F

$x = -2$

4

What is the value of 'x' for this point labelled 'A'?



A

$x = 2$

B

$x = 3$

C

$x = 4$

D

$x = 1$

E

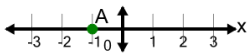
$x = 6$

F

$x = 0$

5

What is the value of 'x' for this point labelled 'A'?



A

$x = 1$

B

$x = 0$

C

$x = 2$

D

$x = -4$

E

$x = -2$

F

$x = -1$