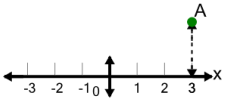




Cartesian Grid - X Coordinate number line (indicator)

**1**

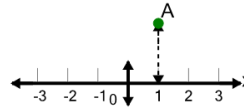
What is the value of 'x' for this point labelled 'A'?



A	$x = 6$	B	$x = 2$
C	$x = 3$	D	$x = 4$
E	$x = 1$	F	$x = 5$

2

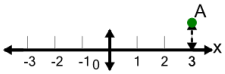
What is the value of 'x' for this point labelled 'A'?



A	$x = -1$	B	$x = -2$
C	$x = 1$	D	$x = 2$
E	$x = 3$	F	$x = 0$

3

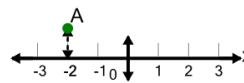
What is the value of 'x' for this point labelled 'A'?



A	$x = 0$	B	$x = 1$
C	$x = 2$	D	$x = 4$
E	$x = 3$	F	$x = 6$

4

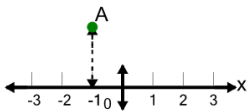
What is the value of 'x' for this point labelled 'A'?



A	$x = -3$	B	$x = -2$
C	$x = 1$	D	$x = -5$
E	$x = -4$	F	$x = 0$

5

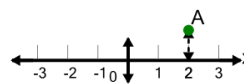
What is the value of 'x' for this point labelled 'A'?



A	$x = -3$	B	$x = 1$
C	$x = -2$	D	$x = 2$
E	$x = -1$	F	$x = 0$

6

What is the value of 'x' for this point labelled 'A'?



A	$x = 5$	B	$x = 3$
C	$x = 0$	D	$x = 2$
E	$x = -1$	F	$x = 1$