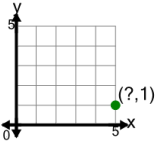


## Cartesian Grid - Points (X only) (no indicator)

**1**

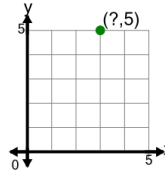
Identify the x value of the point's coordinates



A	3	B	4
C	9	D	8
E	7	F	5

**2**

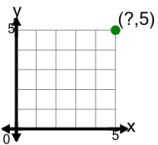
Identify the x value of the point's coordinates



A	4	B	3
C	1	D	5
E	7	F	0

**3**

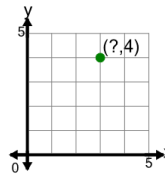
Identify the x value of the point's coordinates



A	3	B	2
C	4	D	5
E	9	F	7

**4**

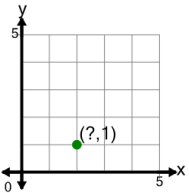
Identify the x value of the point's coordinates



A	3	B	7
C	2	D	1
E	6	F	0

**5**

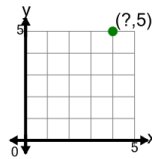
Identify the x value of the point's coordinates



A	5	B	3
C	4	D	1
E	0	F	2

**6**

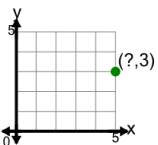
Identify the x value of the point's coordinates



A	8	B	4
C	1	D	2
E	7	F	6

**7**

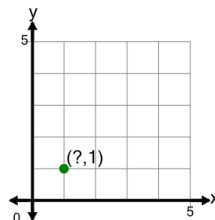
Identify the x value of the point's coordinates



A	8	B	5
C	2	D	3
E	7	F	9

**8**

Identify the x value of the point's coordinates



A	4	B	1
C	3	D	0
E	2	F	5