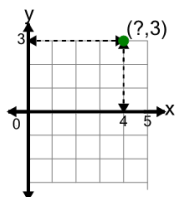




Cartesian Grid - Points (one dimension to complete coordinates) (indicator)

1

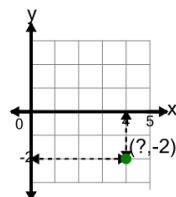
Complete the coordinates of the point by identifying the x value



| | | | |
|---|--------|---|--------|
| A | (4,3) | B | (-4,3) |
| C | (4,-3) | D | (-3,4) |
| E | (3,-4) | F | (5,3) |

2

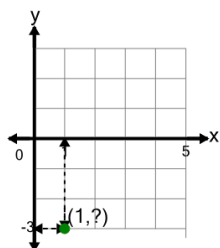
Complete the coordinates of the point by identifying the x value



| | | | |
|---|--------|---|---------|
| A | (-2,4) | B | (4,-2) |
| C | (4,-1) | D | (-4,-2) |
| E | (4,2) | F | (-2,-4) |

3

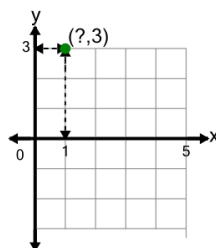
Complete the coordinates of the point by identifying the y value



| | | | |
|---|--------|---|---------|
| A | (3,1) | B | (-1,-3) |
| C | (-3,1) | D | (2,-3) |
| E | (1,-3) | F | (1,-2) |

4

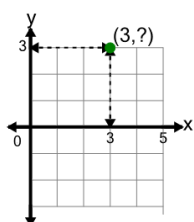
Complete the coordinates of the point by identifying the x value



| | | | |
|---|--------|---|--------|
| A | (1,3) | B | (-1,3) |
| C | (2,3) | D | (3,1) |
| E | (1,-3) | F | (1,4) |

5

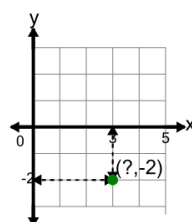
Complete the coordinates of the point by identifying the y value



| | | | |
|---|--------|---|--------|
| A | (3,4) | B | (3,3) |
| C | (4,3) | D | (3,-3) |
| E | (-3,3) | | |

6

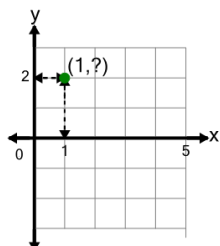
Complete the coordinates of the point by identifying the x value



| | | | |
|---|---------|---|--------|
| A | (-3,-2) | B | (3,-2) |
| C | (3,-1) | D | (4,-2) |
| E | (-2,-3) | F | (3,2) |

7

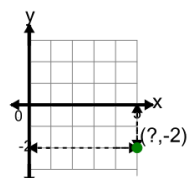
Complete the coordinates of the point by identifying the y value



| | | | |
|---|--------|---|--------|
| A | (1,2) | B | (-1,2) |
| C | (1,3) | D | (1,-2) |
| E | (-2,1) | F | (2,1) |

8

Complete the coordinates of the point by identifying the x value



| | | | |
|---|---------|---|--------|
| A | (-2,5) | B | (5,-2) |
| C | (-2,-5) | D | (5,-1) |
| E | (5,2) | F | (6,-2) |