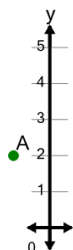




Cartesian Grid - Y Coordinate number line (no indicator)

**1**

What is the value of 'y' for this point labelled 'A'?



A

$y = 3$

B

$y = 5$

C

$y = 1$

D

$y = 2$

E

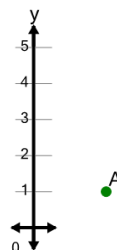
$y = -1$

F

$y = 4$

2

What is the value of 'y' for this point labelled 'A'?



A

$y = -2$

B

$y = -1$

C

$y = 2$

D

$y = 1$

E

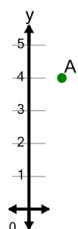
$y = 4$

F

$y = 0$

3

What is the value of 'y' for this point labelled 'A'?



A

$y = 4$

B

$y = 6$

C

$y = 2$

D

$y = 7$

E

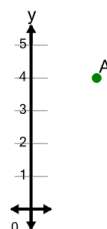
$y = 5$

F

$y = 1$

4

What is the value of 'y' for this point labelled 'A'?



A

$y = 1$

B

$y = 3$

C

$y = 7$

D

$y = 6$

E

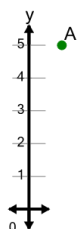
$y = 4$

F

$y = 2$

5

What is the value of 'y' for this point labelled 'A'?



A

$y = 8$

B

$y = 4$

C

$y = 3$

D

$y = 5$

E

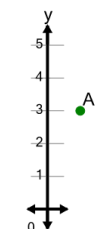
$y = 2$

F

$y = 7$

6

What is the value of 'y' for this point labelled 'A'?



A

$y = 1$

B

$y = 0$

C

$y = 6$

D

$y = 5$

E

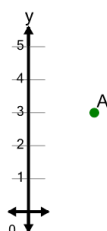
$y = 3$

F

$y = 4$

7

What is the value of 'y' for this point labelled 'A'?



A

$y = 3$

B

$y = 6$

C

$y = 4$

D

$y = 2$

E

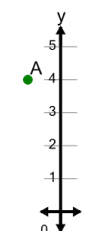
$y = 1$

F

$y = 5$

8

What is the value of 'y' for this point labelled 'A'?



A

$y = 7$

B

$y = 2$

C

$y = 6$

D

$y = 4$

E

$y = 1$

F

$y = 3$