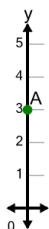


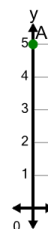


Cartesian Grid - Y Coordinate number line (on axis, just number)

1

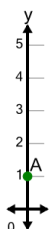
What is the value of 'y' for this point labelled 'A'?

A	1	B	4
C	5	D	2
E	3	F	6

2

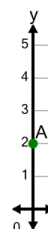
What is the value of 'y' for this point labelled 'A'?

A	5	B	7
C	6	D	3
E	4	F	8

3

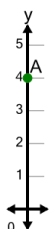
What is the value of 'y' for this point labelled 'A'?

A	-2	B	2
C	0	D	1
E	-1	F	4

4

What is the value of 'y' for this point labelled 'A'?

A	4	B	3
C	0	D	5
E	1	F	2

5

What is the value of 'y' for this point labelled 'A'?

A	5	B	6
C	1	D	7
E	2	F	4