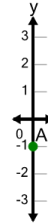


Cartesian Grid - Y Coordinate number line (on axis, just number)

1

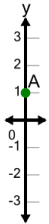
What is the value of 'y' for this point labelled 'A'?

A	1	B	0
C	-1	D	2
E	5	F	3

2

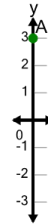
What is the value of 'y' for this point labelled 'A'?

A	-1	B	0
C	2	D	-2
E	-3	F	-4

3

What is the value of 'y' for this point labelled 'A'?

A	1	B	0
C	4	D	-2
E	2	F	-1

4

What is the value of 'y' for this point labelled 'A'?

A	6	B	0
C	5	D	1
E	3	F	2

5

What is the value of 'y' for this point labelled 'A'?

A	-2	B	-5
C	-1	D	1
E	-3	F	-4