
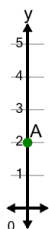


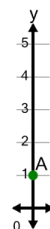


Cartesian Grid - Y Coordinate number line (on axis, just number)

**1**

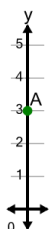
What is the value of 'y' for this point labelled 'A'?

A	4	B	-1
C	2	D	0
E	1	F	5

2

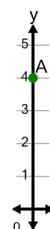
What is the value of 'y' for this point labelled 'A'?

A	-1	B	3
C	4	D	2
E	-2	F	1

3

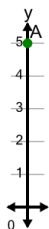
What is the value of 'y' for this point labelled 'A'?

A	3	B	2
C	4	D	0
E	1	F	6

4

What is the value of 'y' for this point labelled 'A'?

A	2	B	7
C	1	D	3
E	6	F	4

5

What is the value of 'y' for this point labelled 'A'?

A	2	B	7
C	3	D	6
E	8	F	5