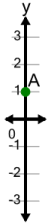




## Cartesian Grid - Y Coordinate number line (on axis, just number)

**1**

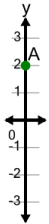
What is the value of 'y' for this point labelled 'A'?

A	2	B	4
C	-1	D	-2
E	3	F	1

**2**

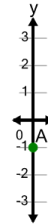
What is the value of 'y' for this point labelled 'A'?

A	-4	B	1
C	-2	D	-5
E	0	F	-3

**3**

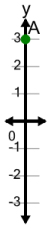
What is the value of 'y' for this point labelled 'A'?

A	2	B	5
C	3	D	4
E	1	F	-1

**4**

What is the value of 'y' for this point labelled 'A'?

A	-1	B	0
C	-4	D	2
E	-3	F	1

**5**

What is the value of 'y' for this point labelled 'A'?

A	6	B	3
C	1	D	4
E	2	F	5