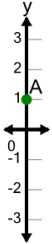




Cartesian Grid - Y Coordinate number line (on axis)

1

What is the value of 'y' for this point labelled 'A'?



A

$y = -1$

B

$y = 0$

C

$y = 2$

D

$y = 1$

E

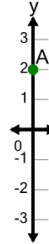
$y = 4$

F

$y = 3$

2

What is the value of 'y' for this point labelled 'A'?



A

$y = 3$

B

$y = -1$

C

$y = 5$

D

$y = 2$

E

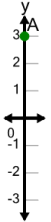
$y = 0$

F

$y = 1$

3

What is the value of 'y' for this point labelled 'A'?



A

$y = 1$

B

$y = 2$

C

$y = 6$

D

$y = 4$

E

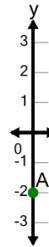
$y = 3$

F

$y = 0$

4

What is the value of 'y' for this point labelled 'A'?



A

$y = -4$

B

$y = -1$

C

$y = -2$

D

$y = -5$

E

$y = -3$

F

$y = 0$

5

What is the value of 'y' for this point labelled 'A'?



A

$y = -1$

B

$y = 0$

C

$y = 1$

D

$y = 2$

E

$y = -2$

F

$y = -4$