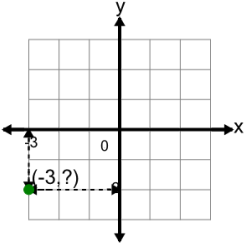
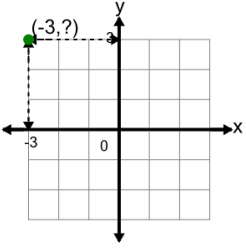
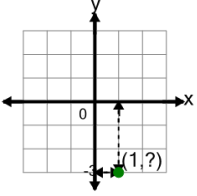
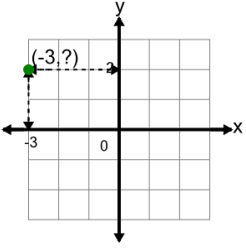
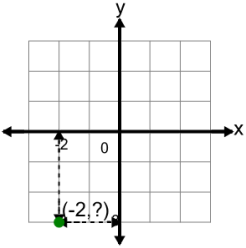
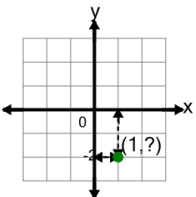
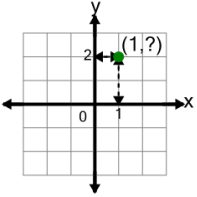
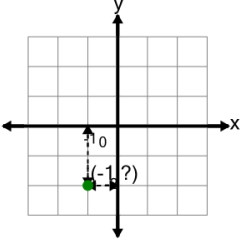




## Cartesian Grid - Points (Y to complete coordinates) (indicator)



<b>1</b> Complete the coordinates of the point by identifying the y value 	A (-2,3)	B (-3,2)
	C (-2,-3)	D (-2,-2)
	E (-3,-2)	F (2,-3)
<b>2</b> Complete the coordinates of the point by identifying the y value 	A (-3,-3)	B (-2,3)
	C (3,3)	D (3,-3)
	E (-3,4)	F (-3,3)
<b>3</b> Complete the coordinates of the point by identifying the y value 	A (-1,-3)	B (3,1)
	C (1,3)	D (1,-3)
	E (2,-3)	F (1,-2)
<b>4</b> Complete the coordinates of the point by identifying the y value 	A (-3,3)	B (-3,-2)
	C (2,-3)	D (2,3)
	E (-2,-3)	F (-3,2)
<b>5</b> Complete the coordinates of the point by identifying the y value 	A (-2,-3)	B (-2,-2)
	C (-1,-3)	D (2,-3)
	E (3,-2)	F (-2,3)
<b>6</b> Complete the coordinates of the point by identifying the y value 	A (1,-1)	B (1,2)
	C (-1,-2)	D (1,-2)
	E (2,-2)	F (-2,-1)
<b>7</b> Complete the coordinates of the point by identifying the y value 	A (1,3)	B (2,1)
	C (1,-2)	D (1,2)
	E (-1,2)	F (-2,1)
<b>8</b> Complete the coordinates of the point by identifying the y value 	A (-1,-1)	B (-1,2)
	C (2,-1)	D (0,-2)
	E (-1,-2)	F (-2,1)